

































Ratios - Equivalent, Expanding Recipes with Integer Multiples - Decimals

<p>1 This paint color needs 7.75 ml of blue for every 8.75 ml of magenta. How much blue is needed if you have 35 ml of magenta</p> <div>   </div> <div>   </div>	<p>A 31 ml</p> <p>C 29 ml</p>	<p>B 31.25 ml</p> <p>D 30.75 ml</p>	<p>2 This sundae needs 3.5 ml of strawberry for every 4.5 ml of chocolate. How much strawberry is needed if you have 13.5 ml of chocolate</p> <div>   </div> <div>   </div>	<p>A 10.5 ml</p> <p>C 12.25 ml</p>	<p>B 8.75 ml</p> <p>D 11.75 ml</p>
<p>3 This smoothie needs 9.25 ml of peach for every 8.25 ml of lime. How much peach is needed if you have 16.5 ml of lime</p> <div>   </div> <div>   </div>	<p>A 18.5 ml</p> <p>C 17 ml</p>	<p>B 18.75 ml</p> <p>D 17.5 ml</p>	<p>4 This paint color needs 6 ml of blue for every 5 ml of magenta. How much blue is needed if you have 15 ml of magenta</p> <div>   </div> <div>   </div>	<p>A 18 ml</p> <p>C 16.75 ml</p>	<p>B 16.25 ml</p> <p>D 18.75 ml</p>
<p>5 This smoothie needs 6.5 ml of peach for every 7.5 ml of lime. How much peach is needed if you have 30 ml of lime</p> <div>   </div> <div>   </div>	<p>A 26 ml</p> <p>C 25.25 ml</p>	<p>B 27.5 ml</p> <p>D 26.25 ml</p>	<p>6 This paint color needs 3 ml of blue for every 4 ml of magenta. How much blue is needed if you have 8 ml of magenta</p> <div>   </div> <div>   </div>	<p>A 6 ml</p> <p>C 5.75 ml</p>	<p>B 7 ml</p> <p>D 6.25 ml</p>
<p>7 This smoothie needs 3 ml of peach for every 2 ml of lime. How much peach is needed if you have 4 ml of lime</p> <div>   </div> <div>   </div>	<p>A 6 ml</p> <p>C 5.5 ml</p>	<p>B 7.5 ml</p> <p>D 6.75 ml</p>	<p>8 This smoothie needs 6 ml of peach for every 7 ml of lime. How much peach is needed if you have 28 ml of lime</p> <div>   </div> <div>   </div>	<p>A 24 ml</p> <p>C 24.75 ml</p>	<p>B 25.75 ml</p> <p>D 22.25 ml</p>