




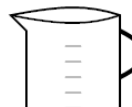





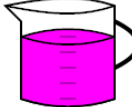
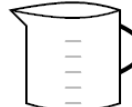




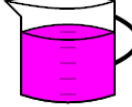
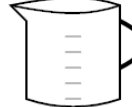








Ratios - Equivalent, Expanding Recipes with Non-Integer Multiples - Decimals

<p>1 This smoothie needs 3 ml of peach for every 2 ml of lime. How much peach is needed if you have 2.5 ml of lime</p> <div style="display: flex; justify-content: space-around;"> <div style="text-align: center;">  2 ml </div> <div style="text-align: center;">  3 ml </div> </div> <div style="display: flex; justify-content: space-around; margin-top: 20px;"> <div style="text-align: center;">  2.5 ml </div> <div style="text-align: center;">  ? ml </div> </div>	<p>A 3.75 ml</p> <p>C 2.75 ml</p>	<p>B 5.25 ml</p> <p>D 2 ml</p>	<p>2 This paint color needs 2 ml of blue for every 3 ml of magenta. How much blue is needed if you have 3.75 ml of magenta</p> <div style="display: flex; justify-content: space-around;"> <div style="text-align: center;">  3 ml </div> <div style="text-align: center;">  2 ml </div> </div> <div style="display: flex; justify-content: space-around; margin-top: 20px;"> <div style="text-align: center;">  3.75 ml </div> <div style="text-align: center;">  ? ml </div> </div>	<p>A 2.5 ml</p> <p>C 1.25 ml</p>	<p>B 3.5 ml</p> <p>D 0.5 ml</p>
<p>3 This smoothie needs 2 ml of peach for every 3 ml of lime. How much peach is needed if you have 5.25 ml of lime</p> <div style="display: flex; justify-content: space-around;"> <div style="text-align: center;">  3 ml </div> <div style="text-align: center;">  2 ml </div> </div> <div style="display: flex; justify-content: space-around; margin-top: 20px;"> <div style="text-align: center;">  5.25 ml </div> <div style="text-align: center;">  ? ml </div> </div>	<p>A 3.5 ml</p> <p>C 3.75 ml</p>	<p>B 2 ml</p> <p>D 4.25 ml</p>	<p>4 This paint color needs 2 ml of blue for every 3 ml of magenta. How much blue is needed if you have 9 ml of magenta</p> <div style="display: flex; justify-content: space-around;"> <div style="text-align: center;">  3 ml </div> <div style="text-align: center;">  2 ml </div> </div> <div style="display: flex; justify-content: space-around; margin-top: 20px;"> <div style="text-align: center;">  9 ml </div> <div style="text-align: center;">  ? ml </div> </div>	<p>A 6 ml</p> <p>C 4.75 ml</p>	<p>B 4.25 ml</p> <p>D 4 ml</p>
<p>5 This paint color needs 7.5 ml of blue for every 6.5 ml of magenta. How much blue is needed if you have 9.75 ml of magenta</p> <div style="display: flex; justify-content: space-around;"> <div style="text-align: center;">  6.5 ml </div> <div style="text-align: center;">  7.5 ml </div> </div> <div style="display: flex; justify-content: space-around; margin-top: 20px;"> <div style="text-align: center;">  9.75 ml </div> <div style="text-align: center;">  ? ml </div> </div>	<p>A 11.25 ml</p> <p>C 11.5 ml</p>	<p>B 12 ml</p> <p>D 10.75 ml</p>	<p>6 This paint color needs 4.5 ml of blue for every 3.5 ml of magenta. How much blue is needed if you have 5.25 ml of magenta</p> <div style="display: flex; justify-content: space-around;"> <div style="text-align: center;">  3.5 ml </div> <div style="text-align: center;">  4.5 ml </div> </div> <div style="display: flex; justify-content: space-around; margin-top: 20px;"> <div style="text-align: center;">  5.25 ml </div> <div style="text-align: center;">  ? ml </div> </div>	<p>A 6.75 ml</p> <p>C 6 ml</p>	<p>B 7.5 ml</p> <p>D 8.25 ml</p>
<p>7 This sauce needs 3.5 ml of mustard for every 4.5 ml of ketchup. How much mustard is needed if you have 9 ml of ketchup</p> <div style="display: flex; justify-content: space-around;"> <div style="text-align: center;">  4.5 ml </div> <div style="text-align: center;">  3.5 ml </div> </div> <div style="display: flex; justify-content: space-around; margin-top: 20px;"> <div style="text-align: center;">  9 ml </div> <div style="text-align: center;">  ? ml </div> </div>	<p>A 7 ml</p> <p>C 6.75 ml</p>	<p>B 5 ml</p> <p>D 7.75 ml</p>	<p>8 This sundae needs 5 ml of strawberry for every 6 ml of chocolate. How much strawberry is needed if you have 12 ml of chocolate</p> <div style="display: flex; justify-content: space-around;"> <div style="text-align: center;">  6 ml </div> <div style="text-align: center;">  5 ml </div> </div> <div style="display: flex; justify-content: space-around; margin-top: 20px;"> <div style="text-align: center;">  12 ml </div> <div style="text-align: center;">  ? ml </div> </div>	<p>A 10 ml</p> <p>C 9.25 ml</p>	<p>B 9.75 ml</p> <p>D 9.5 ml</p>