










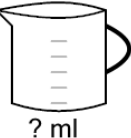









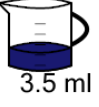





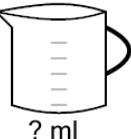






Ratios - Equivalent, Expanding Recipes with Non-Integer Multiples - Decimals

<p>1 This sundae needs 4 ml of strawberry for every 5 ml of chocolate. How much strawberry is needed if you have 10 ml of chocolate</p> <div>   </div> <div>   </div>	<p>A 8 ml</p> <p>C 6.75 ml</p>	<p>B 7.25 ml</p> <p>D 8.75 ml</p>	<p>2 This sundae needs 2 ml of strawberry for every 3 ml of chocolate. How much strawberry is needed if you have 4.5 ml of chocolate</p> <div>   </div> <div>   </div>	<p>A 3 ml</p> <p>C 1.5 ml</p>	<p>B 3.75 ml</p> <p>D 4.75 ml</p>
<p>3 This sundae needs 6 ml of strawberry for every 7 ml of chocolate. How much strawberry is needed if you have 17.5 ml of chocolate</p> <div>   </div> <div>   </div>	<p>A 15 ml</p> <p>C 16.25 ml</p>	<p>B 16.75 ml</p> <p>D 13.5 ml</p>	<p>4 This paint color needs 10.5 ml of blue for every 9.5 ml of magenta. How much blue is needed if you have 23.75 ml of magenta</p> <div>   </div> <div>   </div>	<p>A 26.25 ml</p> <p>C 26.75 ml</p>	<p>B 24.25 ml</p> <p>D 27.5 ml</p>
<p>5 This smoothie needs 2.25 ml of peach for every 1.25 ml of lime. How much peach is needed if you have 1.5625 ml of lime</p> <div>   </div> <div>   </div>	<p>A 2.81 ml</p> <p>C 4.56 ml</p>	<p>B 0.81 ml</p> <p>D 3.31 ml</p>	<p>6 This paint color needs 3.5 ml of blue for every 2.5 ml of magenta. How much blue is needed if you have 8.125 ml of magenta</p> <div>   </div> <div>   </div>	<p>A 11.38 ml</p> <p>C 10.62 ml</p>	<p>B 13.12 ml</p> <p>D 9.62 ml</p>
<p>7 This sauce needs 1.5 ml of mustard for every 2.5 ml of ketchup. How much mustard is needed if you have 7.5 ml of ketchup</p> <div>   </div> <div>   </div>	<p>A 4.5 ml</p> <p>C 3 ml</p>	<p>B 2.75 ml</p> <p>D 2.5 ml</p>	<p>8 This sundae needs 9.25 ml of strawberry for every 8.25 ml of chocolate. How much strawberry is needed if you have 14.4375 ml of chocolate</p> <div>   </div> <div>   </div>	<p>A 16.19 ml</p> <p>C 14.69 ml</p>	<p>B 16.94 ml</p> <p>D 14.19 ml</p>