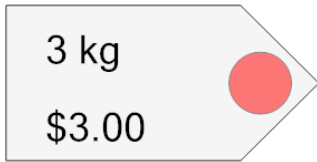


Ratios - Unit Rates, Find Unit Price - Decimals

1 What is the price per kg of this item?



A

\$1.00/kg

B

\$1.25/kg

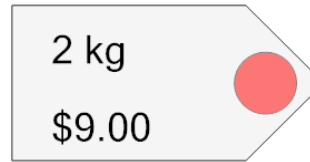
C

\$2.00/kg

D

\$2.50/kg

2 What is the price per kg of this item?



A

\$4.50/kg

B

\$3.00/kg

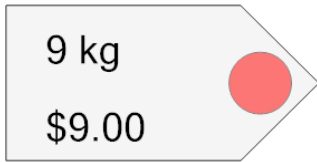
C

\$4.75/kg

D

\$2.50/kg

3 What is the price per kg of this item?



A

\$1.00/kg

B

\$2.75/kg


C

\$0.25/kg

D

\$0.75/kg

4 What is the price per kg of this item?



A

\$1.50/kg

B

\$2.00/kg

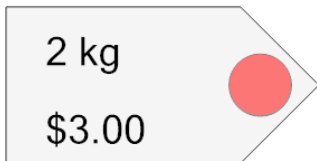
C

\$0.25/kg

D

\$1.00/kg

5 What is the price per kg of this item?



A

\$1.50/kg

B

\$2.75/kg

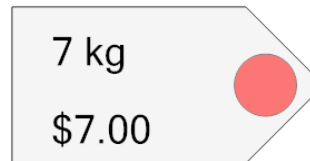
C

\$1.00/kg

D

\$0.50/kg

6 What is the price per kg of this item?



A

\$1.00/kg

B

\$0.25/kg

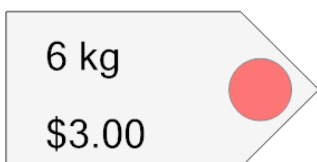
C

\$1.50/kg

D

\$0.50/kg

7 What is the price per kg of this item?



A

\$0.50/kg

B

\$1.75/kg

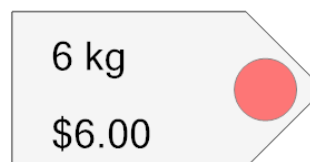
C

\$2.25/kg

D

\$0.25/kg

8 What is the price per kg of this item?



A

\$1.00/kg

B

\$0.25/kg

C

\$0.50/kg

D

\$2.25/kg