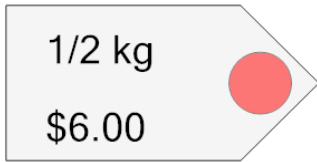


Ratios - Unit Rates, Find Unit Price - Fractions

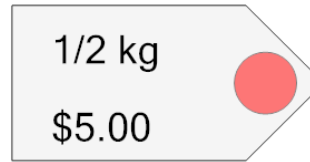
1 What is the price per kg of this item?



A \$12.00/kg B \$10.50/kg

C \$13.75/kg D \$11.50/kg

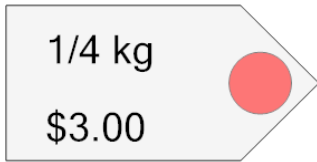
2 What is the price per kg of this item?



A \$10.00/kg B \$9.00/kg

C \$11.25/kg D \$11.50/kg

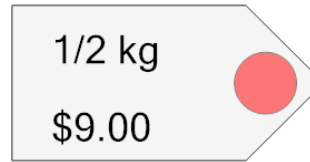
3 What is the price per kg of this item?



A \$12.00/kg B \$11.00/kg

C \$13.00/kg D \$13.50/kg

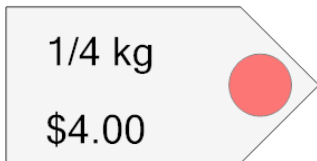
4 What is the price per kg of this item?



A \$18.00/kg B \$17.00/kg

C \$18.50/kg D \$19.75/kg

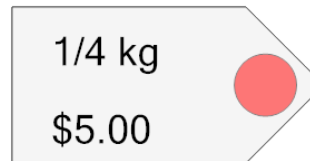
5 What is the price per kg of this item?



A \$16.00/kg B \$15.75/kg

C \$16.75/kg D \$17.25/kg

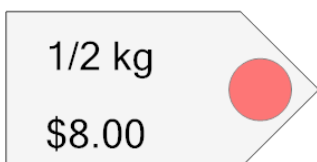
6 What is the price per kg of this item?



A \$20.00/kg B \$18.75/kg

C \$18.50/kg D \$20.75/kg

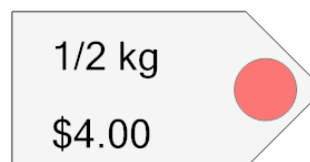
7 What is the price per kg of this item?



A \$16.00/kg B \$17.00/kg

C \$15.50/kg D \$17.75/kg

8 What is the price per kg of this item?



A \$8.00/kg B \$9.75/kg

C \$7.00/kg D \$7.75/kg