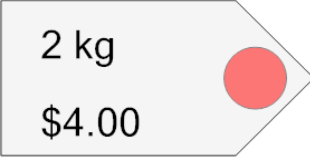
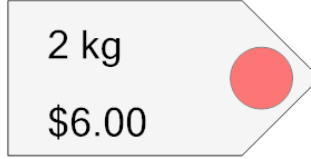
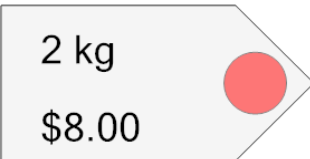
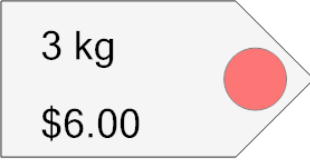




Ratios - Unit Rates, Find Unit Price - Whole Numbers

1 What is the price per kg of this item? 	A \$2.00/kg	B \$1.00/kg	2 What is the price per kg of this item? 	A \$3.00/kg	B \$1.00/kg
	C \$3.00/kg			C \$4.00/kg	D \$2.00/kg
3 What is the price per kg of this item? 	A \$4.00/kg	B \$5.00/kg	4 What is the price per kg of this item? 	A \$3.00/kg	B \$1.00/kg
	C \$2.00/kg			C \$2.00/kg	D \$4.00/kg
5 What is the price per kg of this item? 	A \$2.00/kg	B \$3.00/kg			
	C \$1.00/kg				