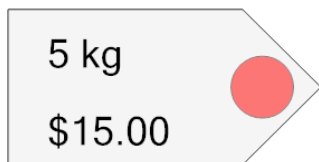




Ratios - Unit Rates, Find Unit Price - Whole Numbers

1 What is the price per kg of this item?



A

\$3.00/kg

B

\$4.00/kg

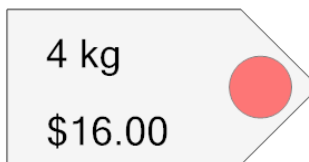
C

\$1.00/kg

D

\$2.00/kg

2 What is the price per kg of this item?



A

\$4.00/kg

B

\$2.00/kg

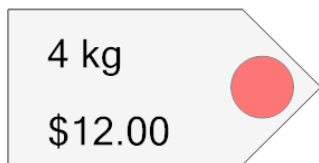
C

\$5.00/kg

D

\$3.00/kg

3 What is the price per kg of this item?



A

\$3.00/kg

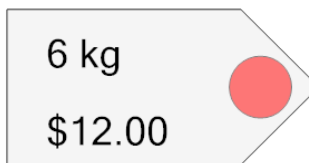
B

\$1.00/kg

C

\$4.00/kg

4 What is the price per kg of this item?



A

\$2.00/kg

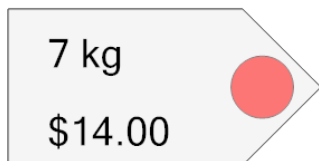
B

\$3.00/kg

C

\$1.00/kg

5 What is the price per kg of this item?



A

\$2.00/kg

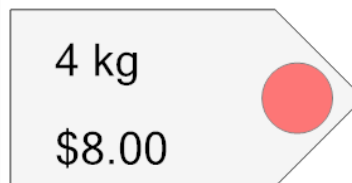
B

\$3.00/kg

C

\$1.00/kg

6



What is the price per kg of this item?

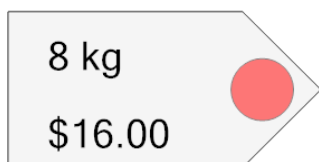
A

\$2.00/kg

B

\$3.00/kg

7 What is the price per kg of this item?



A

\$2.00/kg

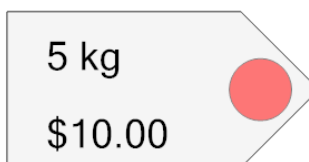
B

\$3.00/kg

C

\$1.00/kg

8 What is the price per kg of this item?



A

\$2.00/kg

B

\$3.00/kg

C

\$1.00/kg