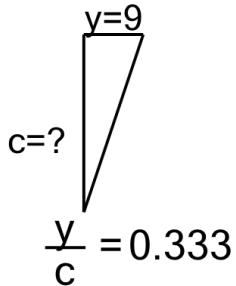


## Ratios of Lengths - Length and Ratio to Bottom Length, Whole Numbers - Right Angle Line Display

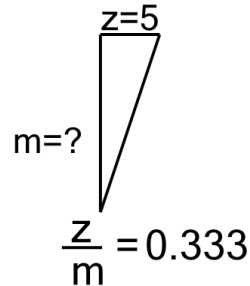
1



Solve for the length of line c

A	10	B	27
C	13	D	11
E	30	F	24

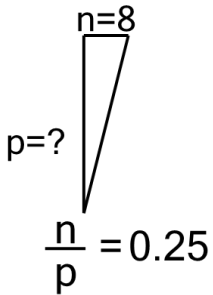
2



Solve for the length of line m

A	4	B	19
C	2	D	8
E	1	F	15

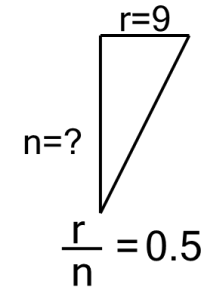
3



Solve for the length of line p

A	8	B	10
C	12	D	32
E	7	F	6

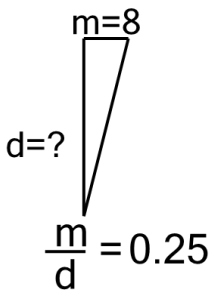
4



Solve for the length of line n

A	22	B	15
C	18	D	4
E	5	F	7

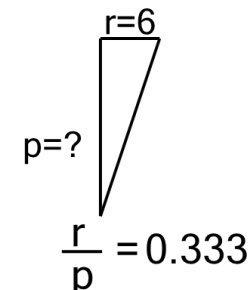
5



Solve for the length of line d

A	7	B	12
C	32	D	30
E	6	F	27

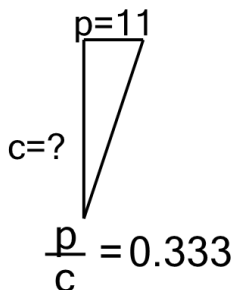
6



Solve for the length of line p

A	1	B	3
C	13	D	10
E	19	F	18

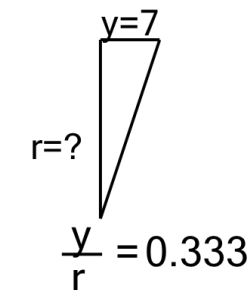
7



Solve for the length of line c

A	30	B	34
C	14	D	33
E	9	F	11

8



Solve for the length of line r

A	20	B	3
C	8	D	21
E	17	F	24