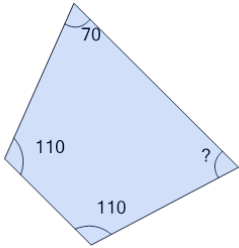
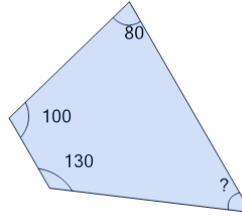
**1**

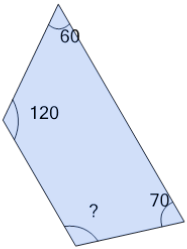
Find the missing angle of the trapezoid given that the interior angles must add up to 360°

A	58	B	70
C	82	D	62
E	74	F	78

2

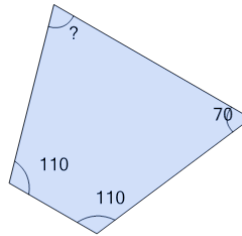
Find the missing angle of the trapezoid given that the interior angles must add up to 360°

A	38	B	54
C	66	D	30
E	62	F	50

3

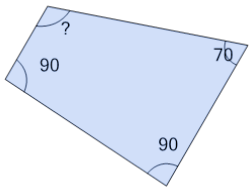
Find the missing angle of the trapezoid given that the interior angles must add up to 360°

A	110	B	122
C	114	D	126
E	94	F	106

4

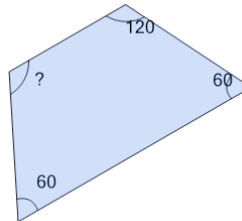
Find the missing angle of the trapezoid given that the interior angles must add up to 360°

A	58	B	70
C	54	D	82
E	62	F	66

5

Find the missing angle of the trapezoid given that the interior angles must add up to 360°

A	118	B	114
C	98	D	126
E	90	F	110

6

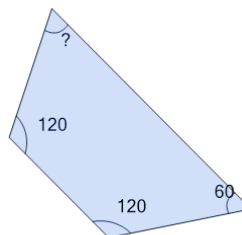
Find the missing angle of the trapezoid given that the interior angles must add up to 360°

A	132	B	116
C	128	D	120
E	108	F	100

7

Find the missing angle of the trapezoid given that the interior angles must add up to 360°

A	22	B	10
C	14	D	18
E	38	F	30

8

Find the missing angle of the trapezoid given that the interior angles must add up to 360°

A	56	B	52
C	60	D	40
E	44	F	68