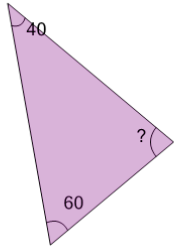
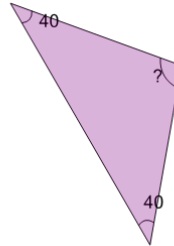


Missing Angle on the Triangle

1

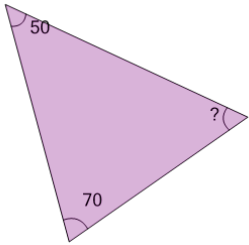
Find the missing angle of the triangle given that the interior angles must add up to 180°

A	110	B	70
C	100	D	80
E	90	F	60

2

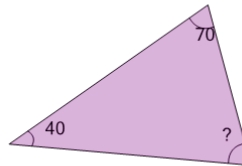
Find the missing angle of the triangle given that the interior angles must add up to 180°

A	100	B	80
C	70	D	90
E	110	F	120

3

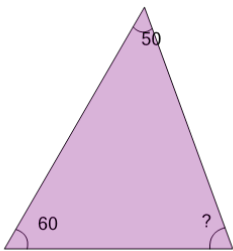
Find the missing angle of the triangle given that the interior angles must add up to 180°

A	60	B	70
C	50	D	90
E	30	F	80

4

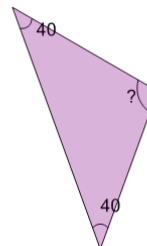
Find the missing angle of the triangle given that the interior angles must add up to 180°

A	60	B	70
C	50	D	90
E	40		

5

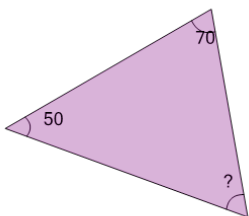
Find the missing angle of the triangle given that the interior angles must add up to 180°

A	50	B	100
C	40	D	60
E	70	F	90

6

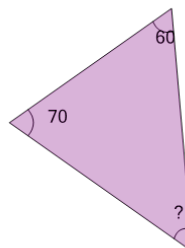
Find the missing angle of the triangle given that the interior angles must add up to 180°

A	110	B	100
C	80	D	130
E	90	F	120

7

Find the missing angle of the triangle given that the interior angles must add up to 180°

A	90	B	40
C	50	D	80
E	70	F	60

8

Find the missing angle of the triangle given that the interior angles must add up to 180°

A	50	B	90
C	40	D	70
E	20	F	30