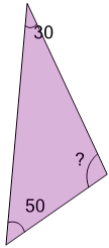
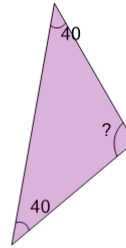


## Missing Angle on the Triangle

**1**

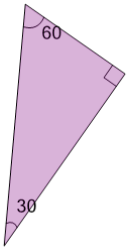
Find the missing angle of the triangle

A	120	B	70
C	80	D	100
E	90	F	110

**2**

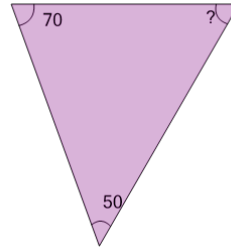
Find the missing angle of the triangle

A	120	B	100
C	80	D	90
E	110	F	130

**3**

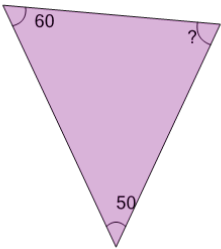
Find the missing angle of the triangle

A	110	B	90
C	120	D	80
E	60	F	70

**4**

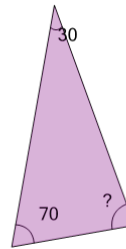
Find the missing angle of the triangle

A	70	B	60
C	40	D	50
E	90	F	80

**5**

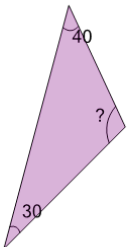
Find the missing angle of the triangle

A	60	B	100
C	50	D	80
E	70	F	90

**6**

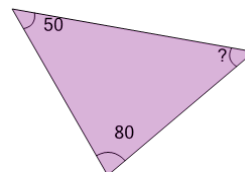
Find the missing angle of the triangle

A	80	B	90
C	60	D	110
E	100	F	70

**7**

Find the missing angle of the triangle

A	90	B	100
C	120	D	130
E	140	F	110

**8**

Find the missing angle of the triangle

A	30	B	40
C	60	D	50
E	70	F	20