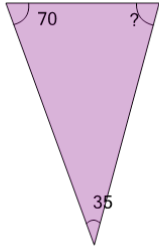
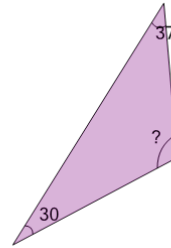


Missing Angle on the Triangle

1

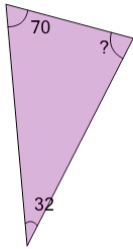
Find the missing angle of the triangle given that the interior angles must add up to 180°

A	75	B	98
C	90	D	53
E	68	F	83

2

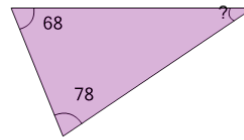
Find the missing angle of the triangle given that the interior angles must add up to 180°

A	113	B	91
C	98	D	83
E	136	F	106

3

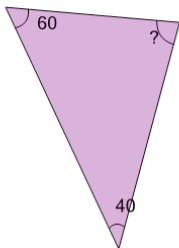
Find the missing angle of the triangle given that the interior angles must add up to 180°

A	63	B	108
C	71	D	78
E	93	F	56

4

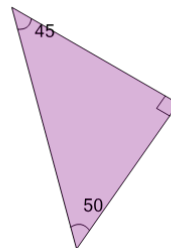
Find the missing angle of the triangle given that the interior angles must add up to 180°

A	49	B	34
C	64	D	42
E	12	F	19

5

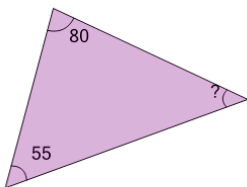
Find the missing angle of the triangle

A	60	B	110
C	90	D	65
E	80	F	50

6

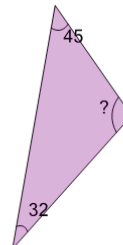
Find the missing angle of the triangle given that the interior angles must add up to 180°

A	55	B	63
C	100	D	85
E	70	F	93

7

Find the missing angle of the triangle

A	45	B	20
C	75	D	50
E	15	F	30

8

Find the missing angle of the triangle given that the interior angles must add up to 180°

A	81	B	96
C	118	D	111
E	103	F	126