
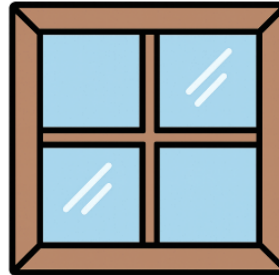


1 What shape is this object?




- A Rectangle
- B Square
- C Parallelogram
- D Oval
- E Trapezoid
- F Kite

2 What shape is this object?



- A Circle
- B Trapezoid
- C Oval
- D Right Triangle
- E Square
- F Non-Right Triangle

3 What shape is this object?




- A Parallelogram
- B Kite
- C Oval
- D Right Triangle
- E Rectangle
- F Non-Right Triangle

4 What shape is this object?



- A Rectangle
- B Right Triangle
- C Oval
- D Circle
- E Trapezoid
- F Rhombus

5 What shape is this object?




- A Rhombus
- B Non-Right Triangle
- C Square
- D Circle
- E Right Triangle
- F Kite

6 What shape is this object?



- A Trapezoid
- B Right Triangle
- C Non-Right Triangle
- D Rhombus
- E Circle
- F Square

7 What shape is this object?



- A Right Triangle
- B Oval
- C Trapezoid
- D Rhombus
- E Rectangle
- F Parallelogram

8 What shape is this object?



- A Non-Right Triangle
- B Trapezoid
- C Rectangle
- D Right Triangle
- E Parallelogram
- F Square