
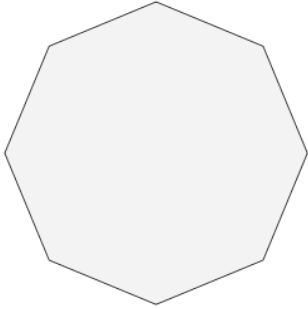




Count Sides on 2D Shapes - First Time



1



How many sides does this shape have?

A

7 Sides

B

8 Sides

2



How many sides does this shape have?

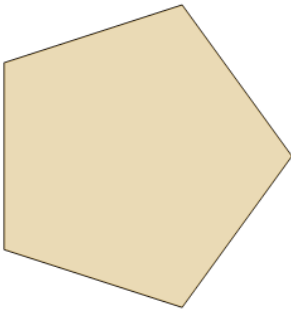
A

3 Sides

B

4 Sides

3



How many sides does this shape have?

A

5 Sides

B

4 Sides

4



How many sides does this shape have?

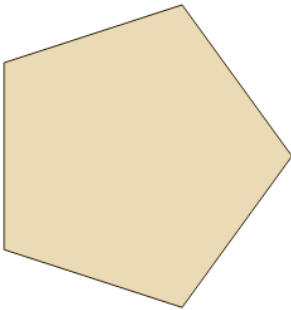
A

4 Sides

B

2 Sides

5



How many sides does this shape have?

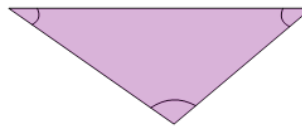
A

5 Sides

B

6 Sides

6



How many sides does this shape have?

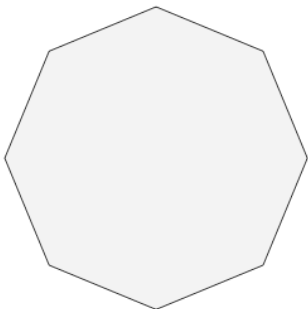
A

4 Sides

B

3 Sides

7



How many sides does this shape have?

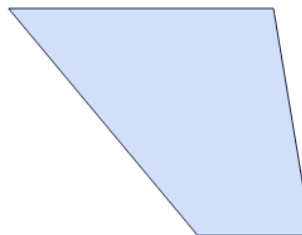
A

8 Sides

B

6 Sides

8



How many sides does this shape have?

A

3 Sides

B

4 Sides