
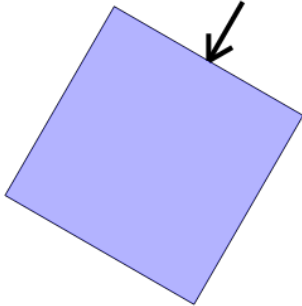




2D Shapes - Side and Vertex Naming - Image to Yes/No



1



Is the arrow pointing to a vertex on this shape?

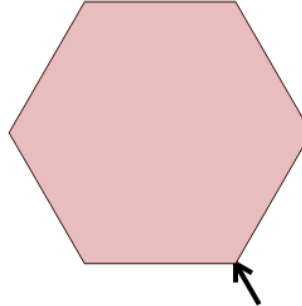
A

Yes

B

No

2



Is the arrow pointing to a vertex on this shape?

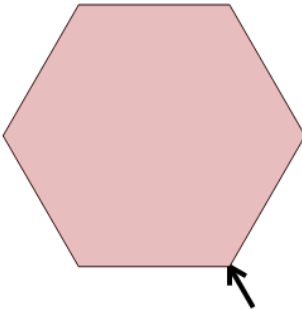
A

Yes

B

No

3



Is the arrow pointing to a side on this shape?

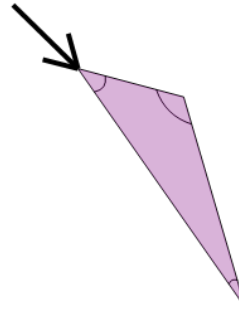
A

Yes

B

No

4



Is the arrow pointing to a vertex on this shape?

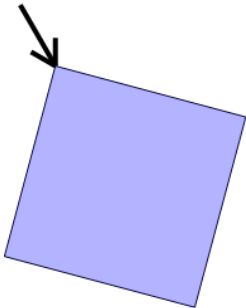
A

Yes

B

No

5



Is the arrow pointing to a vertex on this shape?

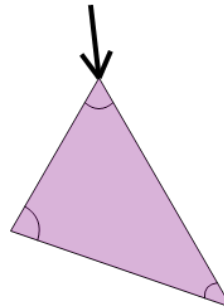
A

Yes

B

No

6



Is the arrow pointing to a vertex on this shape?

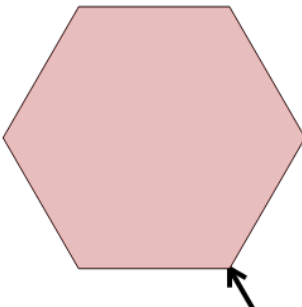
A

Yes

B

No

7



Is the arrow pointing to a side on this shape?

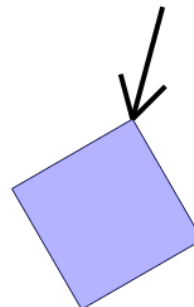
A

Yes

B

No

8



Is the arrow pointing to a vertex on this shape?

A

Yes

B

No