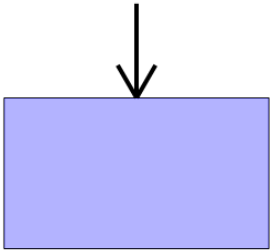
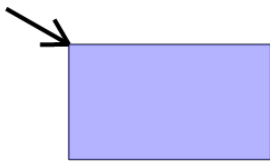
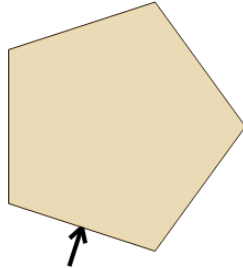
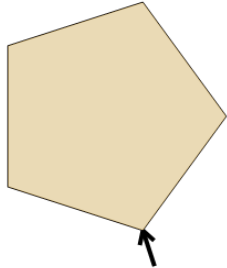

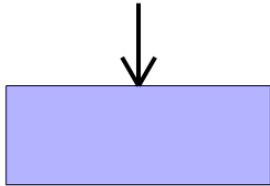
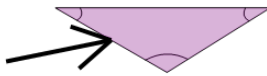
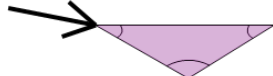
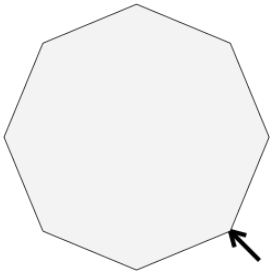
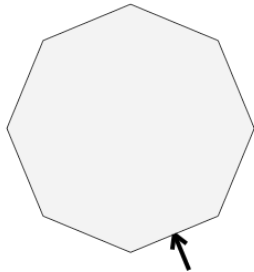
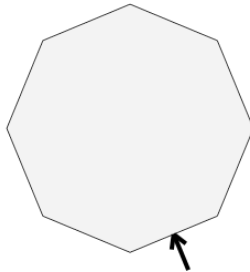
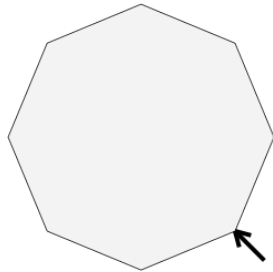
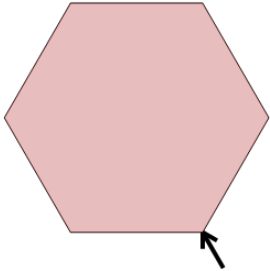
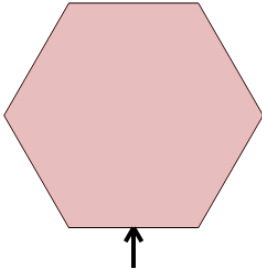
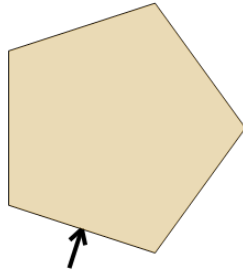




2D Shapes - Side and Vertex Naming - Name to Image



1 Which arrow is pointing to a side of the Rectangle? A 	Rectangle: side B 	2 Which arrow is pointing to a side of the Pentagon? A 	Pentagon: side B 
3 Which arrow is pointing to a vertex of the Rectangle? A 	Rectangle: vertex B 	4 Which arrow is pointing to a vertex of the Triangle? A 	Triangle: vertex B 
5 Which arrow is pointing to a side of the Octagon? A 	Octagon: side B 	6 Which arrow is pointing to a vertex of the Octagon? A 	Octagon: vertex B 
7 Which arrow is pointing to a side of the Hexagon? A 	Hexagon: side B 	8 Which arrow is pointing to a vertex of the Pentagon? A 	Pentagon: vertex B 