


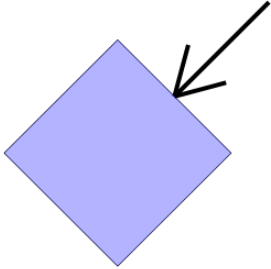


## 2D Shapes - Side and Vertex Naming - Name to Image

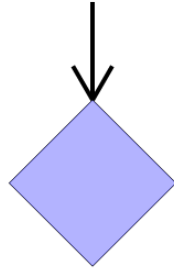


**1** Which arrow is pointing to a side of the Square?  
Square: side

A

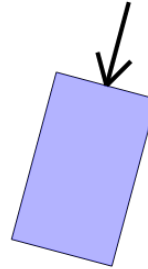


B

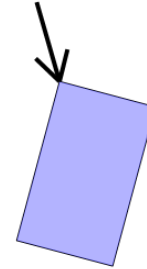


**2** Which arrow is pointing to a vertex of the Rectangle?  
Rectangle: vertex

A

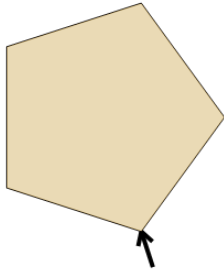


B

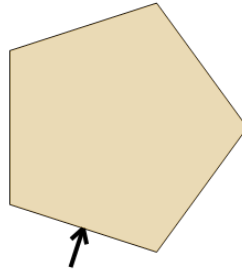


**3** Which arrow is pointing to a vertex of the Pentagon?  
Pentagon: vertex

A

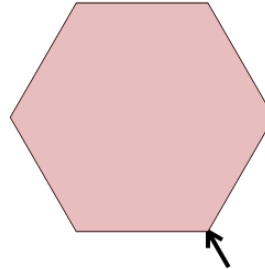


B

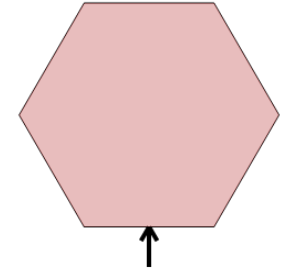


**4** Which arrow is pointing to a side of the Hexagon?  
Hexagon: side

A

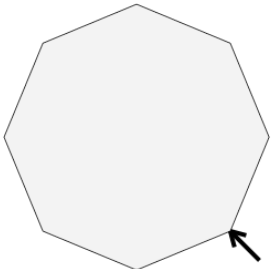


B

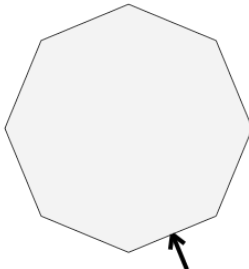


**5** Which arrow is pointing to a vertex of the Octagon?  
Octagon: vertex

A

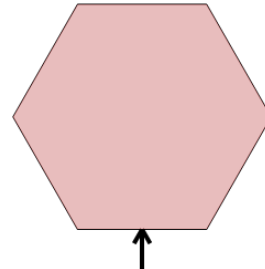


B

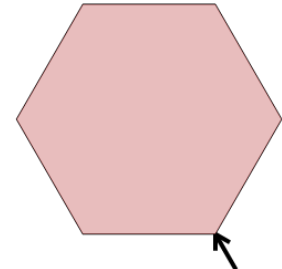


**6** Which arrow is pointing to a vertex of the Hexagon?  
Hexagon: vertex

A

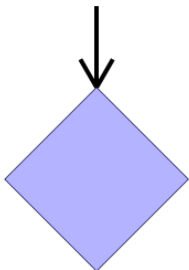


B

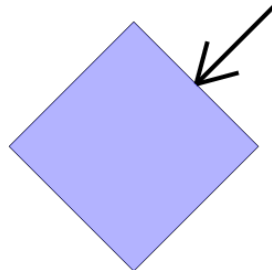


**7** Which arrow is pointing to a vertex of the Square?  
Square: vertex

A

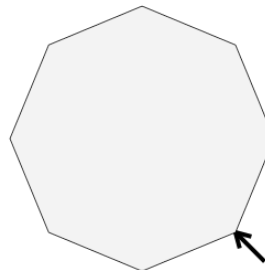


B



**8** Which arrow is pointing to a side of the Octagon?  
Octagon: side

A



B

