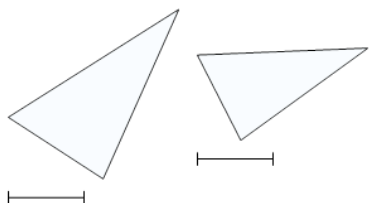




2D Shape Congruent or Similar - Image Pair and Property to Yes/No



1



Are these shapes congruent?

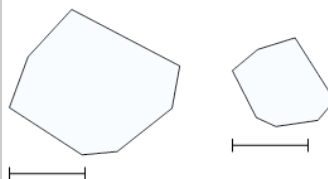
A

Yes

B

No

2



Are these shapes congruent?

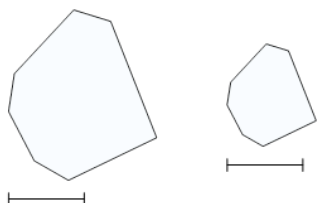
A

Yes

B

No

3



Are these shapes congruent?

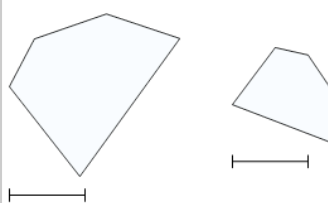
A

Yes

B

No

4



Are these shapes similar?

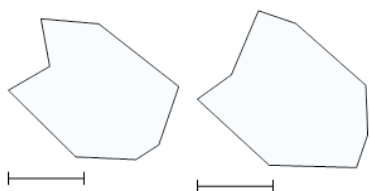
A

Yes

B

No

5



Are these shapes similar?

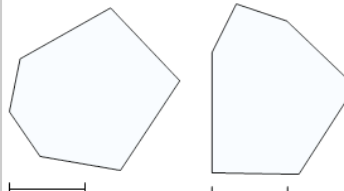
A

Yes

B

No

6



Are these shapes similar?

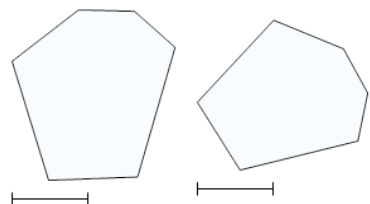
A

Yes

B

No

7



Are these shapes congruent?

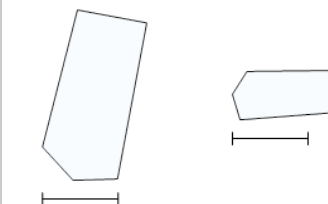
A

Yes

B

No

8



Are these shapes congruent?

A

Yes

B

No