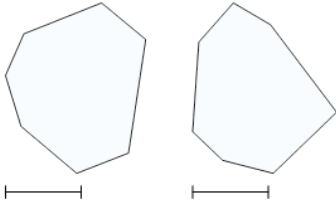




2D Shape Congruent or Similar - Image Pair to Property



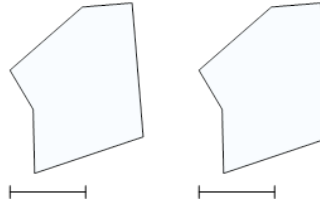
1



What is the best property to describe these shapes?

- | | |
|---|-------------------------------|
| A | similar |
| B | neither similar nor congruent |

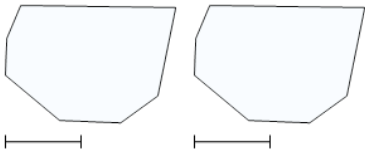
2



What is the best property to describe these shapes?

- | | |
|---|-------------------------------|
| A | neither similar nor congruent |
| B | congruent |

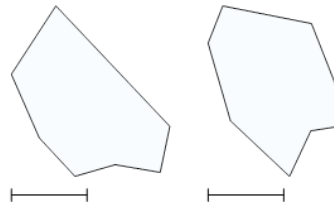
3



What is the best property to describe these shapes?

- | | |
|---|-------------------------------|
| A | congruent |
| B | neither similar nor congruent |

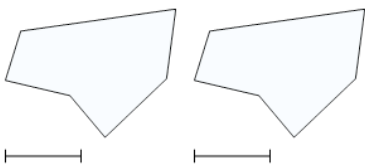
4



What is the best property to describe these shapes?

- | | |
|---|-------------------------------|
| A | neither similar nor congruent |
| B | congruent |

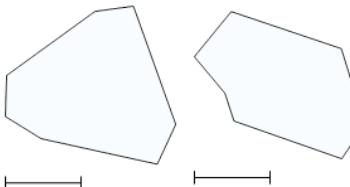
5



What is the best property to describe these shapes?

- | | |
|---|-------------------------------|
| A | congruent |
| B | neither similar nor congruent |

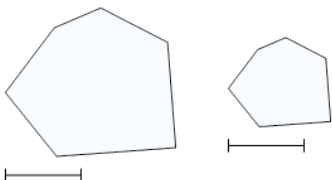
6



What is the best property to describe these shapes?

- | | |
|---|-------------------------------|
| A | similar |
| B | neither similar nor congruent |

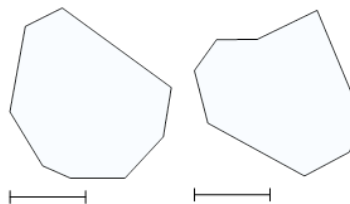
7



What is the best property to describe these shapes?

- | | |
|---|-----------|
| A | congruent |
| B | similar |

8



What is the best property to describe these shapes?

- | | |
|---|-------------------------------|
| A | neither similar nor congruent |
| B | congruent |