




Shapes - 2D Simple (Real World)



1 What shape is this object?




- | | |
|---------------|-------------|
| A
Triangle | B
Oval |
| C
Circle | D
Square |
| | |

2 What shape is this object?




- | | |
|----------------|-------------|
| A
Oval | B
Square |
| C
Rectangle | D
Circle |
| E
Triangle | |

3 What shape is this object?




- | | |
|---------------|----------------|
| A
Oval | B
Square |
| C
Circle | D
Rectangle |
| E
Triangle | |

4 What shape is this object?



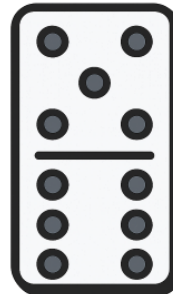
- | | |
|---------------|----------------|
| A
Triangle | B
Rectangle |
| C
Square | D
Oval |
| E
Circle | |

5 What shape is this object?




- | | |
|----------------|---------------|
| A
Rectangle | B
Oval |
| C
Square | D
Triangle |
| E
Circle | |

6 What shape is this object?



- | | |
|----------------|---------------|
| A
Rectangle | B
Oval |
| C
Square | D
Triangle |
| E
Circle | |

7 What shape is this object?



- | | |
|---------------|----------------|
| A
Triangle | B
Rectangle |
| C
Circle | D
Square |
| E
Oval | |

8 What shape is this object?



- | | |
|-------------|----------------|
| A
Square | B
Triangle |
| C
Oval | D
Rectangle |
| E
Circle | |