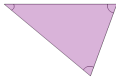


1

Select the shape that is named

Triangle


A



B




C




D



E



F




2

Select the shape that is named

Rectangle

A



B



C



D



E



F



3

Select the shape that is named

Square

A



B



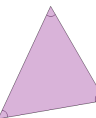
C



D



E



F

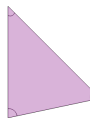


4

Select the shape that is named

Circle

A



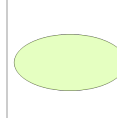
B




C




D



E



F




5

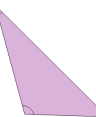
Select the shape that is named

Oval


A



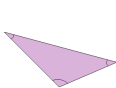
B



C



D



E



F

