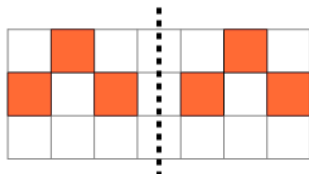




2D Shape Symmetry - Is This Symmetric



1



Are the left and right sides symmetric?

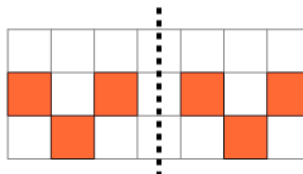
A

Yes

B

No

2



Are the left and right sides symmetric?

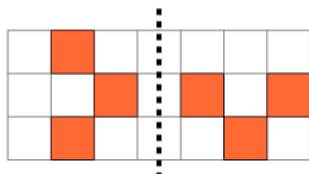
A

Yes

B

No

3



Are the left and right sides symmetric?

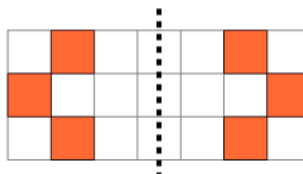
A

Yes

B

No

4



Are the left and right sides symmetric?

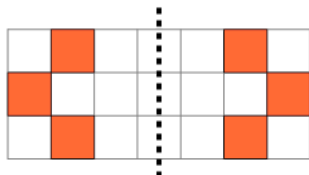
A

Yes

B

No

5



Are the left and right sides symmetric?

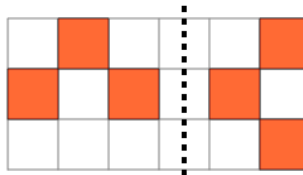
A

Yes

B

No

6



Are the left and right sides symmetric?

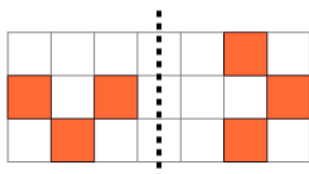
A

Yes

B

No

7



Are the left and right sides symmetric?

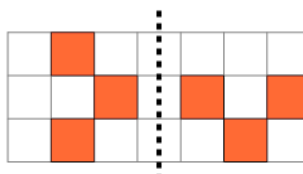
A

Yes

B

No

8



Are the left and right sides symmetric?

A

Yes

B

No