
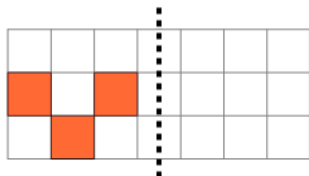




2D Shape Symmetry - Which Shape Is Symmetric

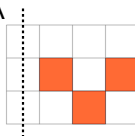


1

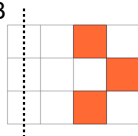


Which right side image would be symmetric?

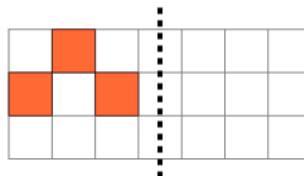
A



B

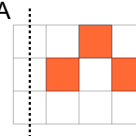


2



Which right side image would be symmetric?

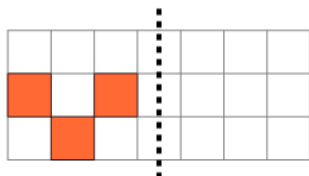
A



B

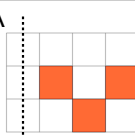


3

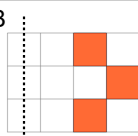


Which right side image would be symmetric?

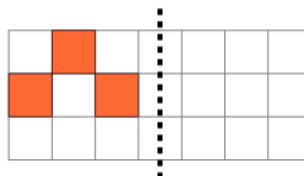
A



B

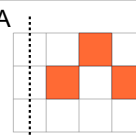


4



Which right side image would be symmetric?

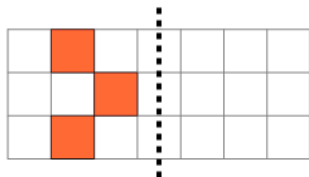
A



B



5

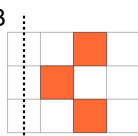


Which right side image would be symmetric?

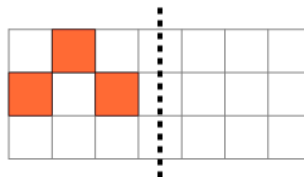
A



B

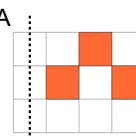


6



Which right side image would be symmetric?

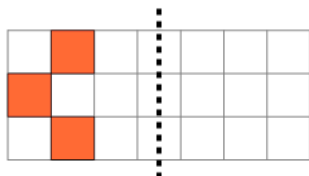
A



B

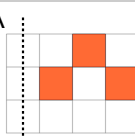


7

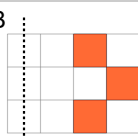


Which right side image would be symmetric?

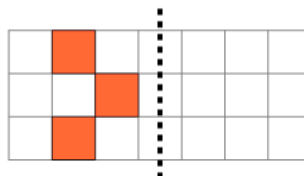
A



B

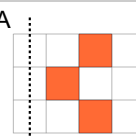


8



Which right side image would be symmetric?

A



B

