
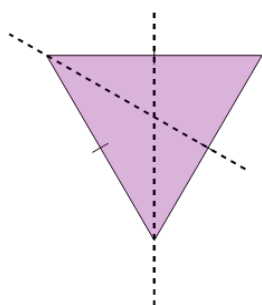




2D Shape Symmetry - How Many Lines of Symmetry (Shown)

**1**

How many lines of symmetry does this Triangle have?



A

6

B

3

C

10

D

2

E

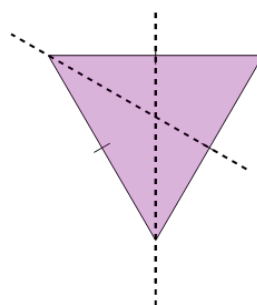
11

F

0

2

How many lines of symmetry does this Triangle have?



A

11

B

2

C

1

D

5

E

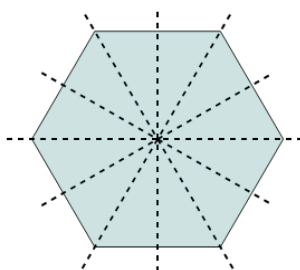
9

F

3

3

How many lines of symmetry does this Hexagon have?



A

6

B

13

C

2

D

4

E

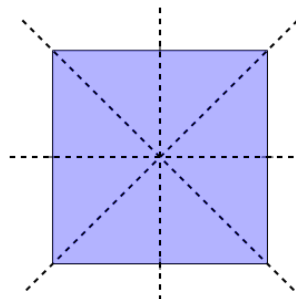
1

F

10

4

How many lines of symmetry does this Square have?



A

7

B

0

C

5

D

4

E

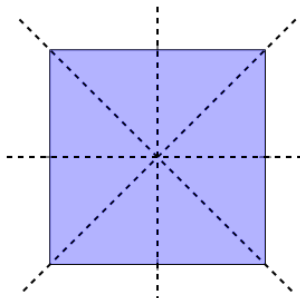
6

F

9

5

How many lines of symmetry does this Square have?



A

5

B

11

C

12

D

8

E

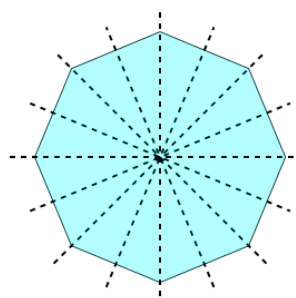
4

F

1

6

How many lines of symmetry does this Octagon have?



A

8

B

5

C

0

D

9

E

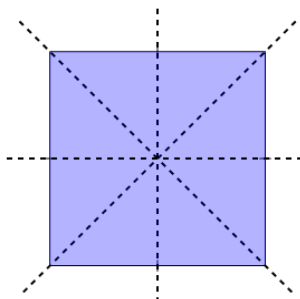
1

F

4

7

How many lines of symmetry does this Square have?



A

4

B

9

C

6

D

5

E

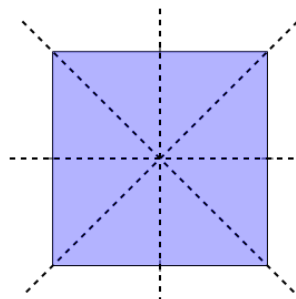
12

F

13

8

How many lines of symmetry does this Square have?



A

7

B

3

C

8

D

13

E

9

F

4