
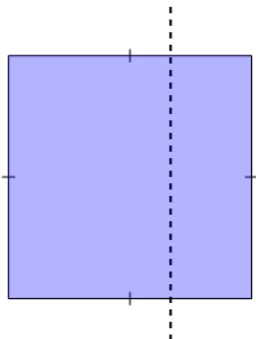




2D Shape Symmetry - Is This a Line of Symmetry



1



Is this a line of symmetry on this Square?

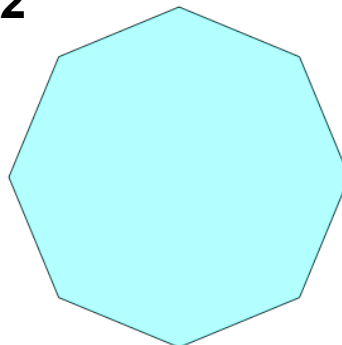
A

Yes

B

No

2



Is this a line of symmetry on this Octagon?

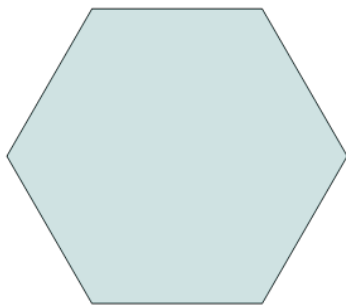
A

Yes

B

No

3



Is this a line of symmetry on this Hexagon?

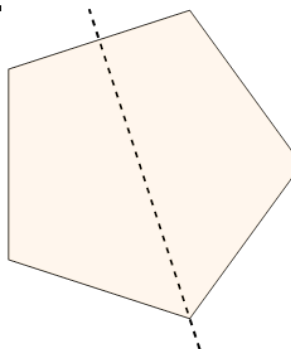
A

Yes

B

No

4



Is this a line of symmetry on this Pentagon?

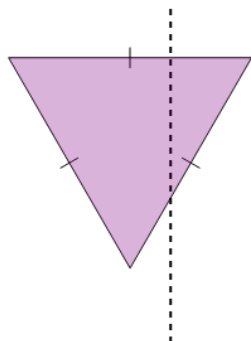
A

Yes

B

No

5



Is this a line of symmetry on this Triangle?

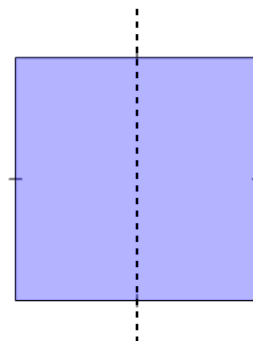
A

Yes

B

No

6



Is this a line of symmetry on this Square?

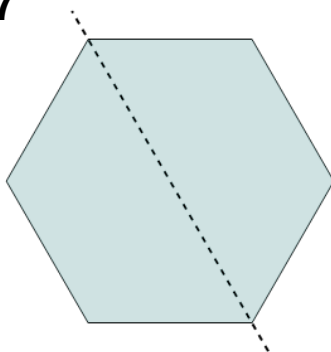
A

Yes

B

No

7



Is this a line of symmetry on this Hexagon?

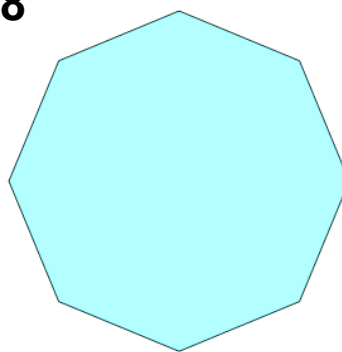
A

Yes

B

No

8



Is this a line of symmetry on this Octagon?

A

Yes

B

No