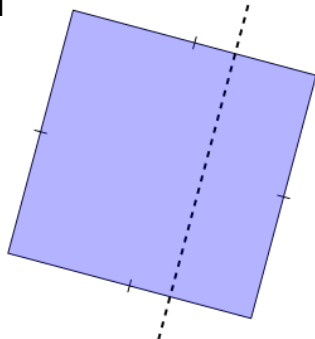




2D Shape Symmetry - Is This a Line of Symmetry



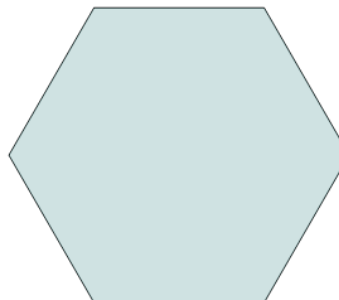
1



Is this a line of symmetry on this Square?

A	B
Yes	No

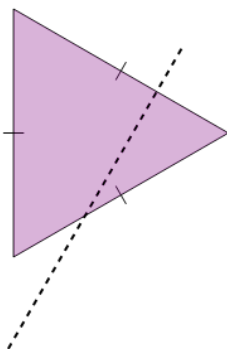
2



Is this a line of symmetry on this Hexagon?

A	B
Yes	No

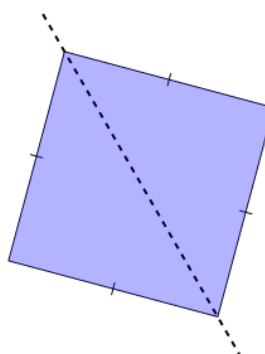
3



Is this a line of symmetry on this Triangle?

A	B
Yes	No

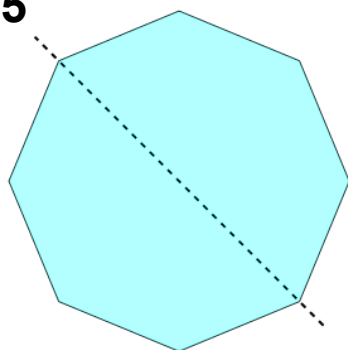
4



Is this a line of symmetry on this Square?

A	B
Yes	No

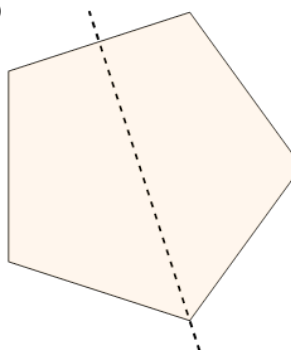
5



Is this a line of symmetry on this Octagon?

A	B
Yes	No

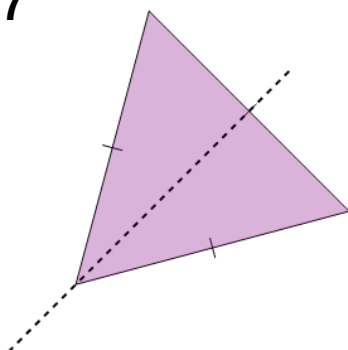
6



Is this a line of symmetry on this Pentagon?

A	B
Yes	No

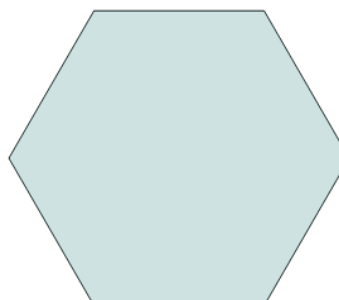
7



Is this a line of symmetry on this Triangle?

A	B
Yes	No

8



Is this a line of symmetry on this Hexagon?

A	B
Yes	No