





## 2D Shape Symmetry - Which is Symmetric




**1**

Which of these shapes is symmetric?

A



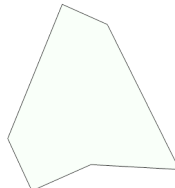
B



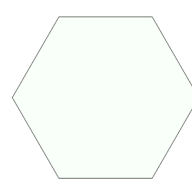
**2**

Which of these shapes is symmetric?

A



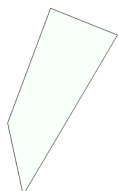
B




**3**

Which of these shapes is symmetric?

A



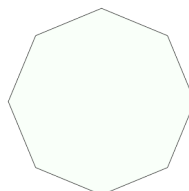
B



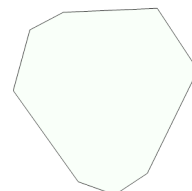
**4**

Which of these shapes is symmetric?

A




B



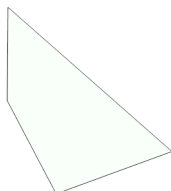
**5**

Which of these shapes is symmetric?

A




B




**6**

Which of these shapes is symmetric?

A



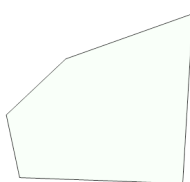
B



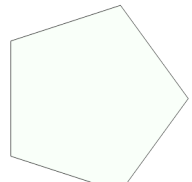
**7**

Which of these shapes is symmetric?

A



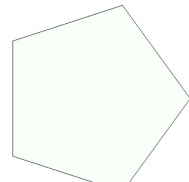
B



**8**

Which of these shapes is symmetric?

A



B

