



2D Shape (Picture) Translation Symmetry - Is This Shape Symmetric



1



Does this pattern have translation symmetry?

A

Yes

B

No

2



Does this pattern have translation symmetry?


A

No

B

Yes

3



Does this pattern have translation symmetry?


A

Yes

B

No

4



Does this pattern have translation symmetry?


A

Yes

B

No

5



Does this pattern have translation symmetry?


A

Yes

B

No

6



Does this pattern have translation symmetry?


A

No

B

Yes

7



Does this pattern have translation symmetry?


A

No

B

Yes

8



Does this pattern have translation symmetry?

A

No

B

Yes