


2D Shape (Picture) Translation Symmetry - Which is Symmetric


1

Which of these pictures has translation symmetry?

A




B




2

Which of these pictures has translation symmetry?

A




B




3

Which of these pictures has translation symmetry?

A




B



4

Which of these pictures has translation symmetry?

A




B




5

Which of these pictures has translation symmetry?

A




B



6

Which of these pictures has translation symmetry?

A




B




7

Which of these pictures has translation symmetry?

A



B



8

Which of these pictures has translation symmetry?

A



B

