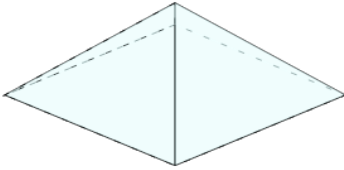




Complex 3D Shapes - Is Specific Type

**1**

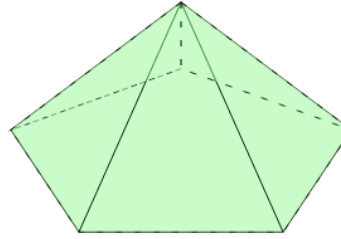
Is this shape a Rectangular Prism (right angle corners and 6 faces that are rectangles)?

A

Yes

B

No

2

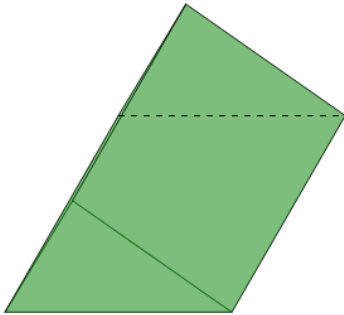
Is this shape a Pentagonal Pyramid (a pentagonal base and triangular sides coming to a point at the top)?

A

No

B

Yes

3

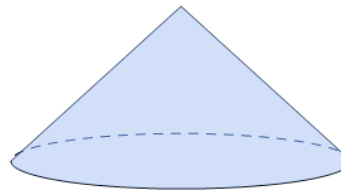
Is this shape a Rectangular Pyramid (a rectangular base and triangular sides coming to a point at the top)?

A

Yes

B

No

4

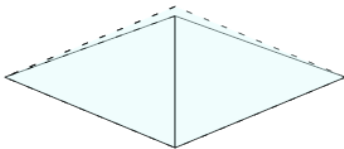
Is this shape a Pentagonal Prism (a pentagonal base and parallel sides coming to a pentagonal top)?

A

Yes

B

No

5

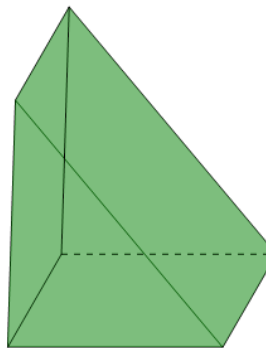
Is this shape a Square Pyramid (a square base and triangular sides coming to a point at the top)?

A

No

B

Yes

6

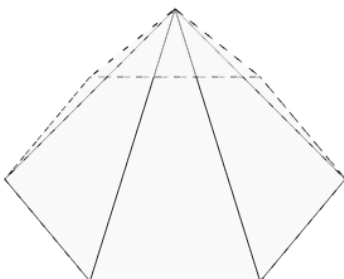
Is this shape a Rectangular Pyramid (a rectangular base and triangular sides coming to a point at the top)?

A

No

B

Yes

7

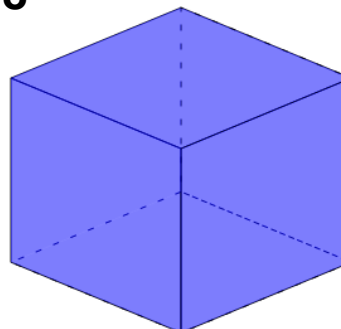
Is this shape a Sphere (a ball shape)?

A

No

B

Yes

8

Is this shape a Triangular Prism (a triangular base and parallel sides coming to a triangular top)?

A

No

B

Yes