




Complex 3D Shapes (Real World) - Is Specific Type



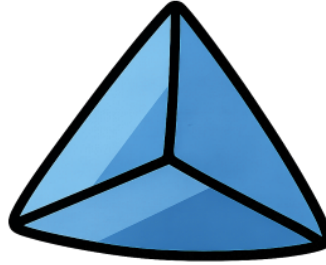
1



Is this shape a Rectangular Prism (right angle corners and 6 faces that are rectangles)?

A	B
No	Yes


2



Is this shape a Rectangular Prism (right angle corners and 6 faces that are rectangles)?

A	B
Yes	No

3



Is this shape a Sphere (a ball shape)?

A	B
Yes	No


4



Is this shape a Cone (a round base and round sides coming to a point)?

A	B
No	Yes

5



Is this shape a Rectangular Prism (right angle corners and 6 faces that are rectangles)?

A	B
Yes	No

6



Is this shape a Sphere (a ball shape)?

A	B
No	Yes

7



Is this shape a Cube (right angle corners and 6 faces that are squares)?

A	B
No	Yes

8



Is this shape a Hexagonal Prism (a hexagonal base and parallel sides coming to a hexagonal top)?

A	B
No	Yes