





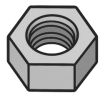










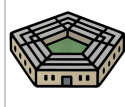

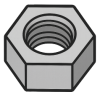

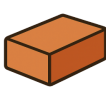




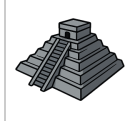













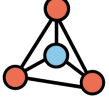











Complex 3D Shapes (Real World) - Reversed



<p>1 Find an object that is this shape</p> <p>Sphere</p>	<p>A</p> 	<p>B</p> 	<p>C</p> 	<p>2 Find an object that is this shape</p> <p>Cube</p>	<p>A</p> 	<p>B</p> 	<p>C</p> 				
	<p>D</p> 	<p>E</p> 	<p>F</p> 		<p>D</p> 	<p>E</p> 	<p>F</p> 				
<p>3 Find an object that is this shape</p> <p>Cone</p>	<p>A</p> 	<p>B</p> 	<p>C</p> 	<p>4 Find an object that is this shape</p> <p>Triangular Prism</p>							
	<p>D</p> 	<p>E</p> 	<p>F</p> 	<p>A</p> 	<p>B</p> 	<p>C</p> 	<p>D</p> 	<p>E</p> 	<p>F</p> 		
<p>5 Find an object that is this shape</p> <p>Tetrahedron</p>	<p>A</p> 	<p>B</p> 	<p>C</p> 	<p>6 Find an object that is this shape</p> <p>Cylinder</p>			<p>A</p> 	<p>B</p> 	<p>C</p> 		
	<p>D</p> 	<p>E</p> 	<p>F</p> 	<p>D</p> 	<p>E</p> 	<p>F</p> 					
<p>7 Find an object that is this shape</p> <p>Square Pyramid</p>				<p>8 Find an object that is this shape</p> <p>Hexagonal Prism</p>							
<p>A</p> 	<p>B</p> 	<p>C</p> 	<p>D</p> 	<p>E</p> 	<p>F</p> 	<p>A</p> 	<p>B</p> 	<p>C</p> 	<p>D</p> 	<p>E</p> 	<p>F</p> 