
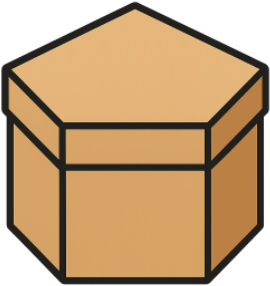




## Complex 3D Shapes (Real World)




**1** What shape does this object have?



- A Hexagonal Prism
- B Sphere
- C Pentagonal Prism
- D Square Pyramid
- E Cylinder
- F Rectangular Pyramid

**2** What shape does this object have?



- A Triangular Prism
- B Square Pyramid
- C Hexagonal Pyramid
- D Cube
- E Pentagonal Prism
- F Cylinder

**3** What shape does this object have?



- A Triangular Prism
- B Cylinder
- C Hexagonal Pyramid
- D Cone
- E Rectangular Pyramid
- F Cube

**4** What shape does this object have?



- A Sphere
- B Hexagonal Prism
- C Cylinder
- D Pentagonal Pyramid
- E Triangular Prism
- F Rectangular Pyramid

**5** What shape does this object have?



- A Triangular Prism
- B Pentagonal Prism
- C Square Pyramid
- D Sphere
- E Rectangular Prism
- F Hexagonal Pyramid

**6** What shape does this object have?



- A Pentagonal Pyramid
- B Cylinder
- C Triangular Prism
- D Cube
- E Cone
- F Sphere

**7** What shape does this object have?



- A Sphere
- B Hexagonal Prism
- C Triangular Prism
- D Square Pyramid
- E Cylinder
- F Rectangular Prism

**8** What shape does this object have?



- A Sphere
- B Hexagonal Pyramid
- C Rectangular Pyramid
- D Pentagonal Pyramid
- E Cube
- F Triangular Prism