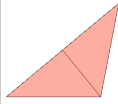
**1**

Select the shape that is named

Cone

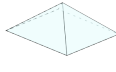
A



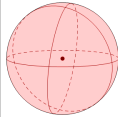
B



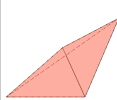
C



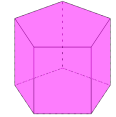
D



E



F

**2**

Select the shape that is named

Rectangular Pyramid

A



B



C



D



E



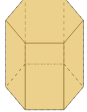
F

**3**

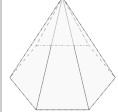
Select the shape that is named

Hexagonal Pyramid

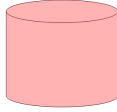
A



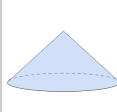
B



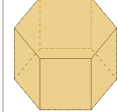
C



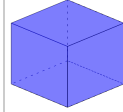
D



E



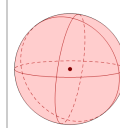
F

**4**

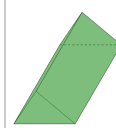
Select the shape that is named

Cylinder

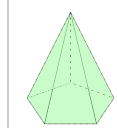
A



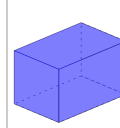
B



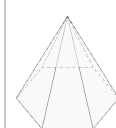
C



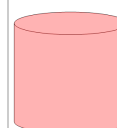
D



E



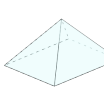
F

**5**

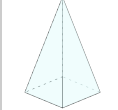
Select the shape that is named

Hexagonal Prism

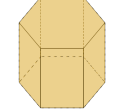
A



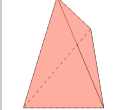
B



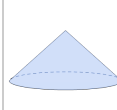
C



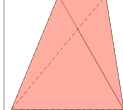
D



E



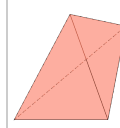
F

**6**

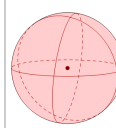
Select the shape that is named

Cube

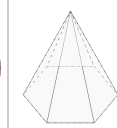
A



B



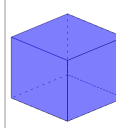
C



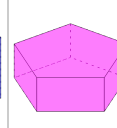
D



E



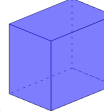
F

**7**

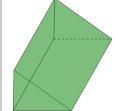
Select the shape that is named

Pentagonal Prism

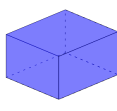
A



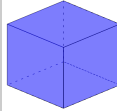
B



C



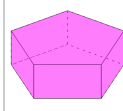
D



E



F

**8**

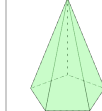
Select the shape that is named

Triangular Prism

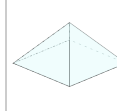
A



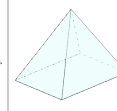
B



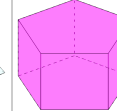
C



D



E



F

