
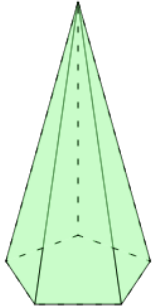




## 3D Shapes - Count Edges - First Time



1



How many edges does this shape have?

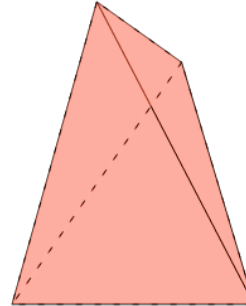
A

8 Edges

B

10 Edges

2



How many edges does this shape have?

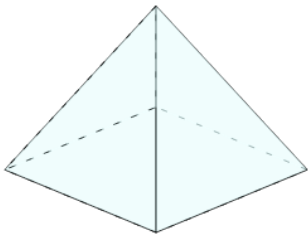
A

6 Edges

B

5 Edges

3



How many edges does this shape have?

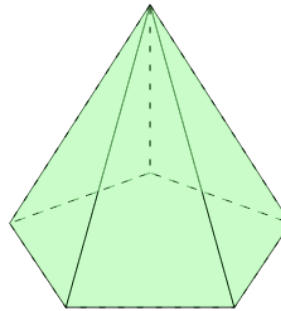
A

8 Edges

B

6 Edges

4



How many edges does this shape have?

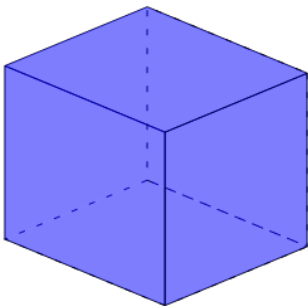
A

10 Edges

B

9 Edges

5



How many edges does this shape have?

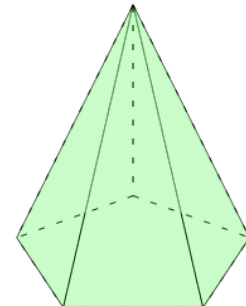
A

11 Edges

B

12 Edges

6



How many edges does this shape have?

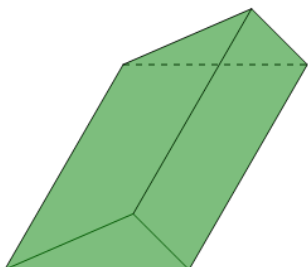
A

9 Edges

B

10 Edges

7



How many edges does this shape have?

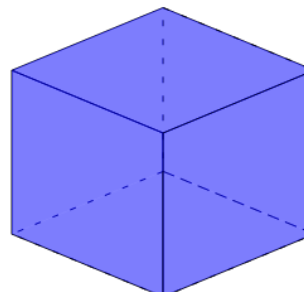
A

7 Edges

B

9 Edges

8



How many edges does this shape have?

A

10 Edges

B

12 Edges