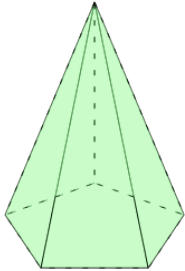
**1**

Count how many edges this shape has



A

9

B

10

C

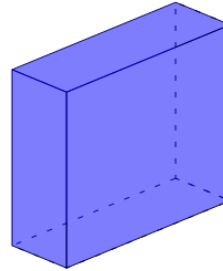
11

D

8

2

Count how many edges this shape has



A

10

B

13

C

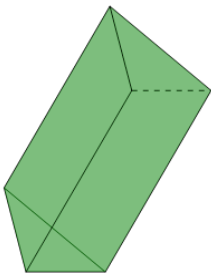
12

D

11

3

Count how many edges this shape has



A

8

B

9

C

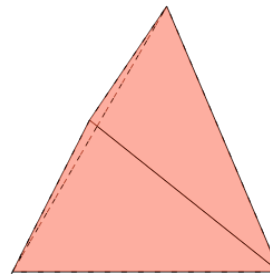
7

D

10

4

Count how many edges this shape has



A

6

B

5

C

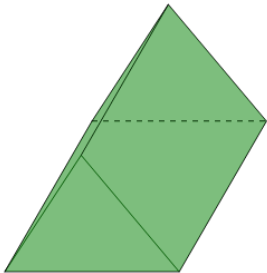
4

D

7

5

Count how many edges this shape has



A

7

B

9

C

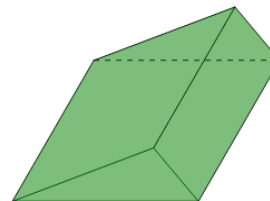
10

D

8

6

Count how many edges this shape has



A

10

B

8

C

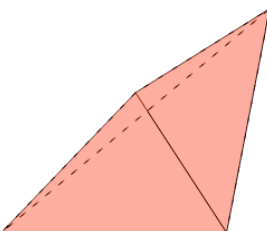
9

D

7

7

Count how many edges this shape has



A

4

B

5

C

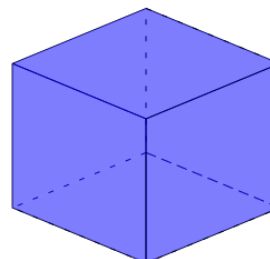
6

D

7

8

Count how many edges this shape has



A

13

B

11

C

12

D

10