


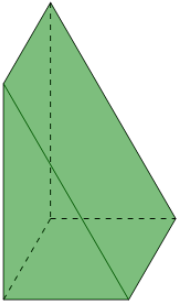


3D Shapes - Count Faces and Vertices - Reversed

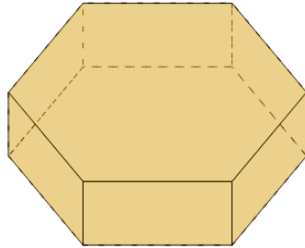


1 Select the shape that is described 8 faces, 12 vertices

A

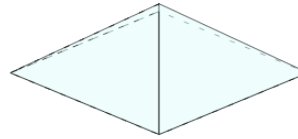


B

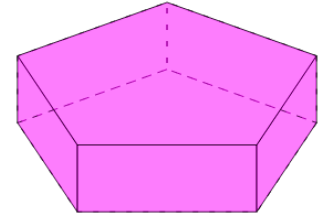


2 Select the shape that is described 7 faces, 10 vertices

A

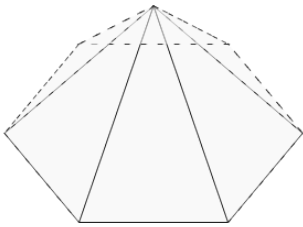


B

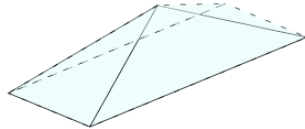


3 Select the shape that is described 5 faces, 5 vertices

A

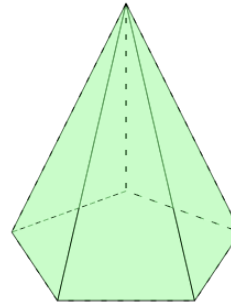


B

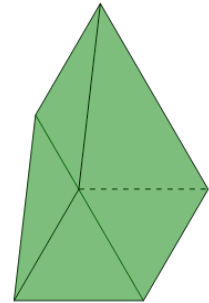


4 Select the shape that is described 6 faces, 6 vertices

A

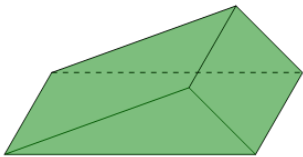


B

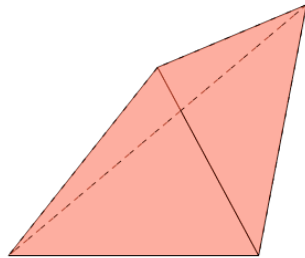


5 Select the shape that is described 5 faces, 6 vertices

A

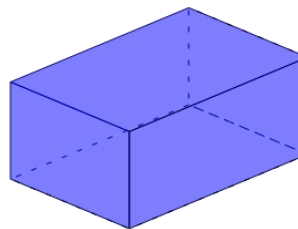


B

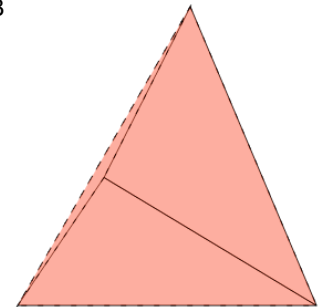


6 Select the shape that is described 6 faces, 8 vertices

A

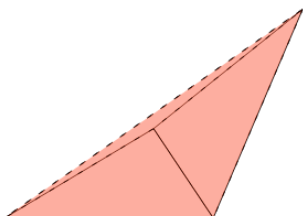


B

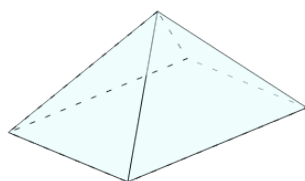


7 Select the shape that is described 4 faces, 4 vertices

A

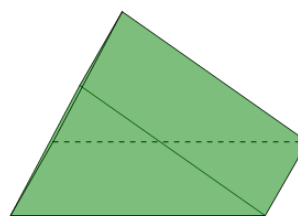


B



8 Select the shape that is described 7 faces, 7 vertices

A



B

