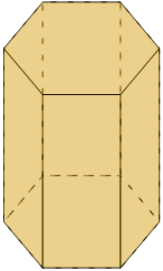
**1**

Count how many faces this shape has



A

6

B

7

C

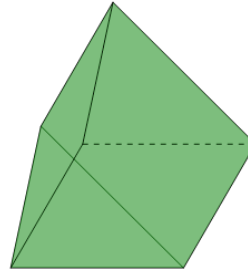
9

D

8

2

Count how many faces this shape has



A

4

B

5

C

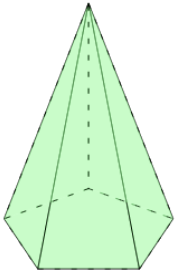
6

D

3

3

Count how many faces this shape has



A

5

B

6

C

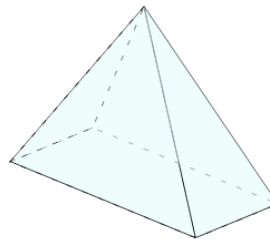
4

D

7

4

Count how many faces this shape has



A

3

B

5

C

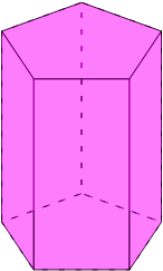
6

D

4

5

Count how many faces this shape has



A

8

B

6

C

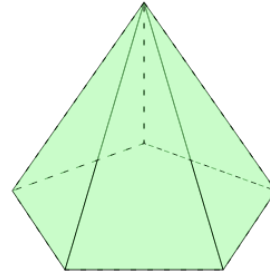
5

D

7

6

Count how many faces this shape has



A

4

B

6

C

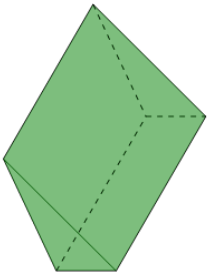
5

D

7

7

Count how many faces this shape has



A

5

B

6

C

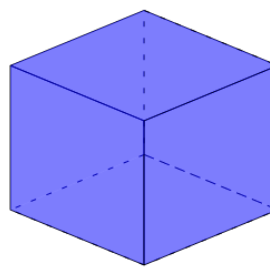
3

D

4

8

Count how many faces this shape has



A

5

B

7

C

6

D

4