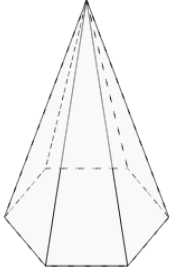
**1**

Count how many vertices this shape has



A

7

B

6

C

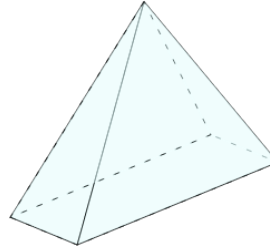
5

D

8

2

Count how many vertices this shape has



A

4

B

5

C

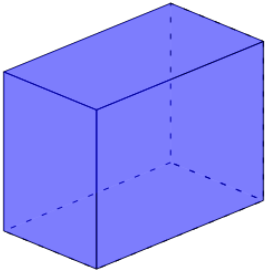
3

D

6

3

Count how many vertices this shape has



A

6

B

8

C

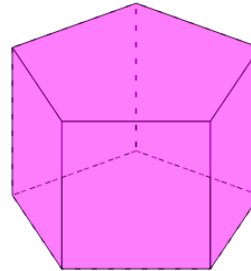
7

D

9

4

Count how many vertices this shape has



A

8

B

10

C

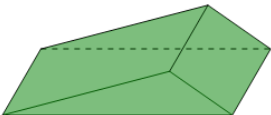
9

D

11

5

Count how many vertices this shape has



A

4

B

5

C

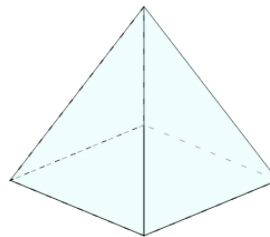
7

D

6

6

Count how many vertices this shape has



A

6

B

4

C

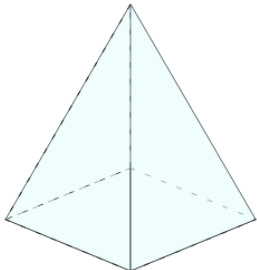
3

D

5

7

Count how many vertices this shape has



A

4

B

5

C

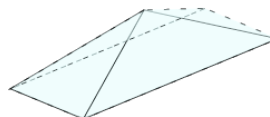
6

D

3

8

Count how many vertices this shape has



A

3

B

4

C

5

D

6