





3D Shapes - Cross Sections (Simple) - To 3D Shape and Plane




1

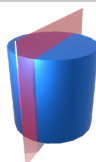


Which cross section would be a Circle?


A



B

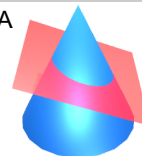


2




Which cross section would be a Oval?


A



B

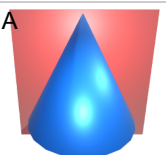


3

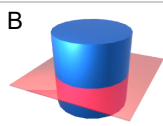


Which cross section would be a Circle?


A



B



4




Which cross section would be a Rectangle?


A



B



5

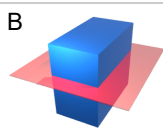


Which cross section would be a Rectangle?


A



B

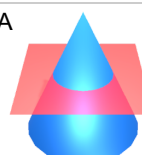


6




Which cross section would be a Triangle?


A



B




7



Which cross section would be a Rectangle?

A



B



8



Which cross section would be a Trapezoid?

A



B

