


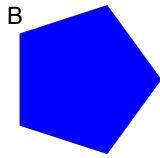



## 3D Shapes - Cross Sections (Simple) - To 2D Shape


1



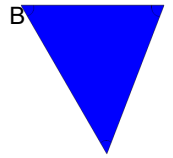
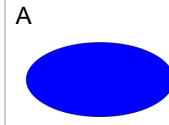
What shape is formed by the cross section of this Rectangular Prism?




2



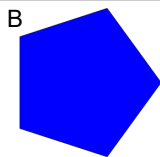

What shape is formed by the cross section of this Cone?




3



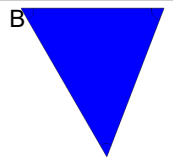
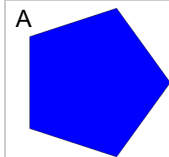
What shape is formed by the cross section of this Rectangular Prism?




4



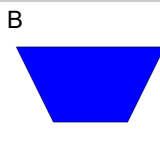
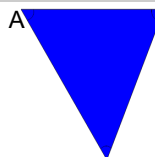
What shape is formed by the cross section of this Rectangular Pyramid?



5



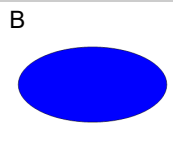

What shape is formed by the cross section of this Triangular Prism?



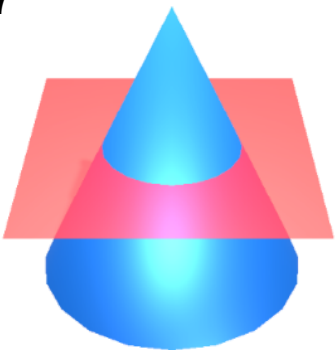
6



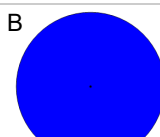
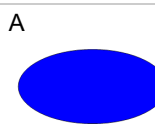
What shape is formed by the cross section of this Cone?



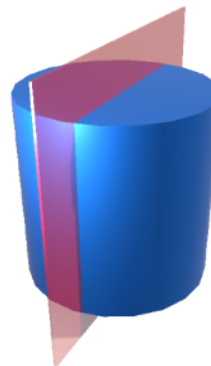
7



What shape is formed by the cross section of this Cone?



8



What shape is formed by the cross section of this Cylinder?

