


3D Shapes - Is the Shape a Prism or Pyramid (Real World)

1

Is this object a prism, pyramid, or neither



A

prism

B

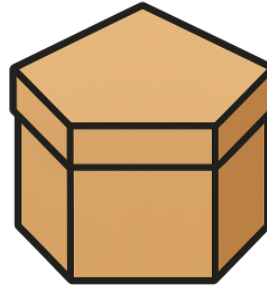
pyramid

C

neither

2

Is this object a prism, pyramid, or neither



A

prism

B

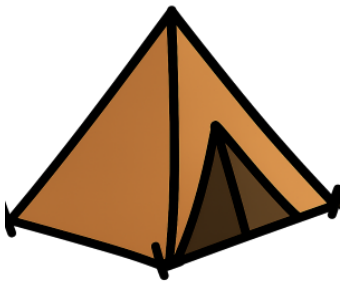
pyramid

C

neither

3

Is this object a prism, pyramid, or neither



A

prism

B


pyramid

C

neither

4

Is this object a prism, pyramid, or neither



A

prism

B

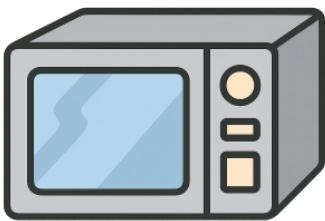
pyramid

C

neither

5

Is this object a prism, pyramid, or neither



A

prism

B

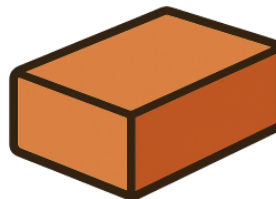
pyramid

C

neither

6

Is this object a prism, pyramid, or neither



A

prism

B

pyramid

C

neither

7

Is this object a prism, pyramid, or neither



A

prism

B

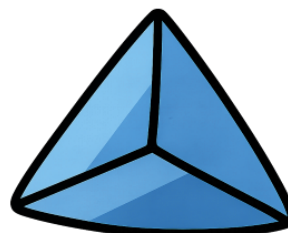
pyramid

C

neither

8

Is this object a prism, pyramid, or neither



A

prism

B

pyramid

C

neither