


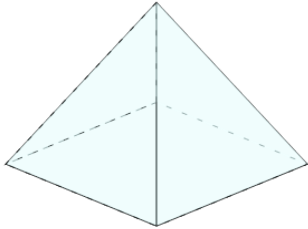


Nets of 3D Shapes - Shape Image to Net

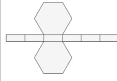


1

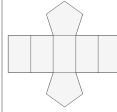
What net would make this 3D shape?



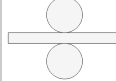
A



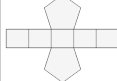
B



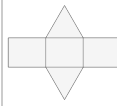
C



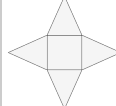
D



E

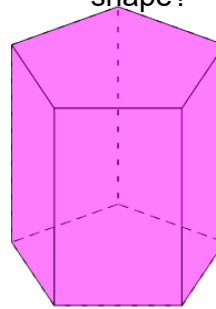


F

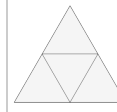


2

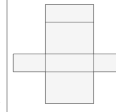
What net would make this 3D shape?



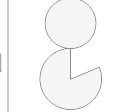
A



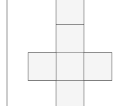
B



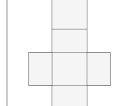
C



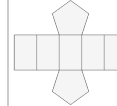
D



E




F

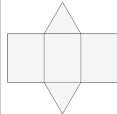


3

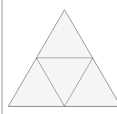
What net would make this 3D shape?



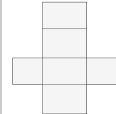
A



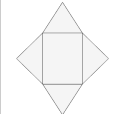
B



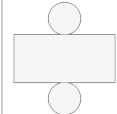
C



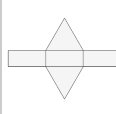
D



E

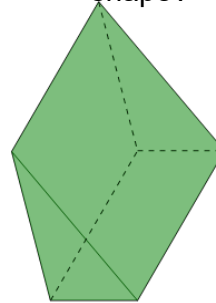


F

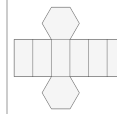


4

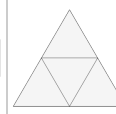
What net would make this 3D shape?



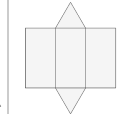
A



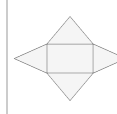
B



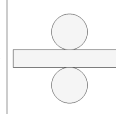
C



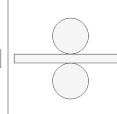
D



E

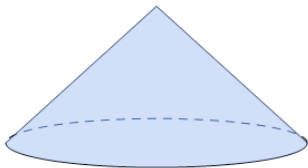


F

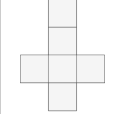


5

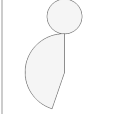
What net would make this 3D shape?



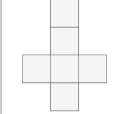
A



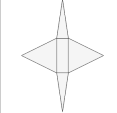
B



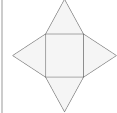
C



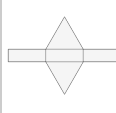
D



E

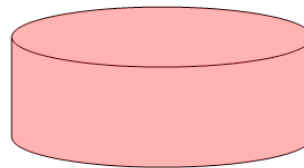


F

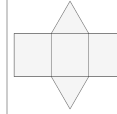


6

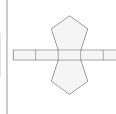
What net would make this 3D shape?



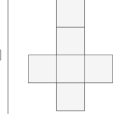
A



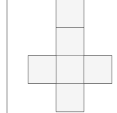
B



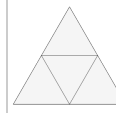
C



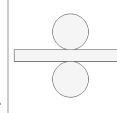
D



E

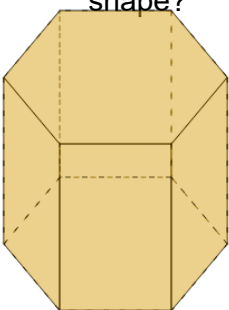


F

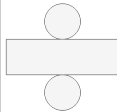


7

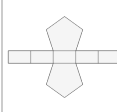
What net would make this 3D shape?



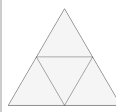
A



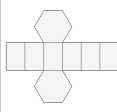
B



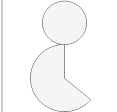
C



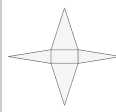
D



E

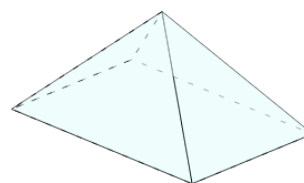


F

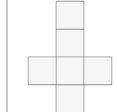


8

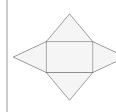
What net would make this 3D shape?



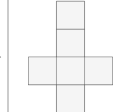
A



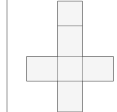
B



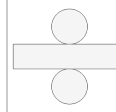
C



D



E



F

