


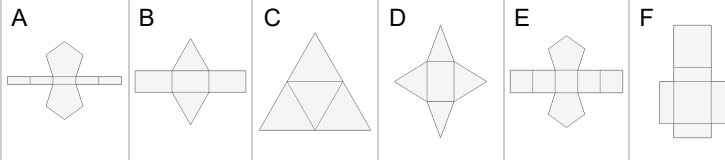


Nets of 3D Shapes - Shape Name to Net



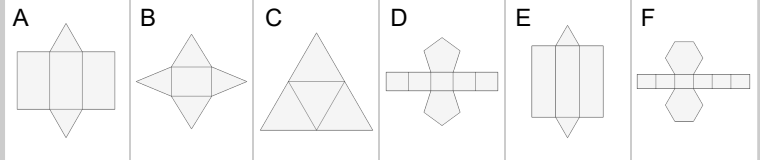
1 What net would make this 3D shape?

Rectangular Prism



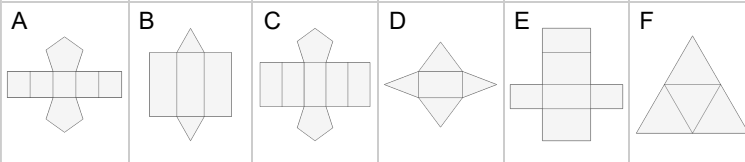
2 What net would make this 3D shape?

Pentagonal Prism



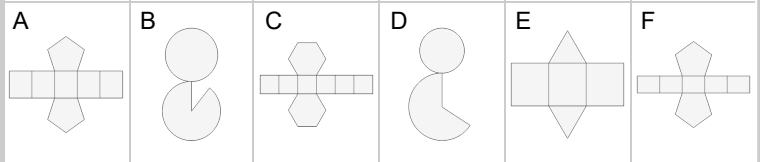
3 What net would make this 3D shape?

Triangular Prism



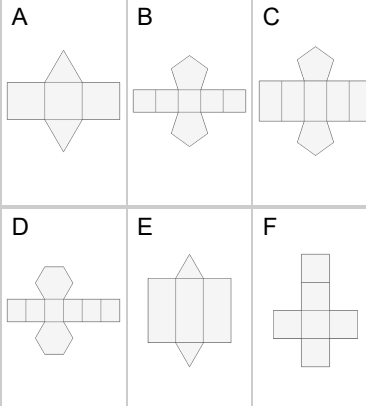
4 What net would make this 3D shape?

Hexagonal Prism



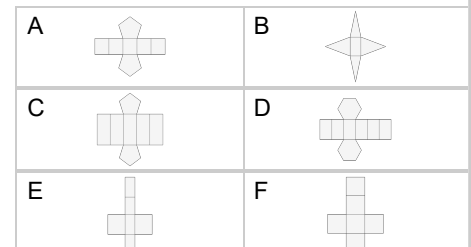
5 What net would make this 3D shape?

Cube



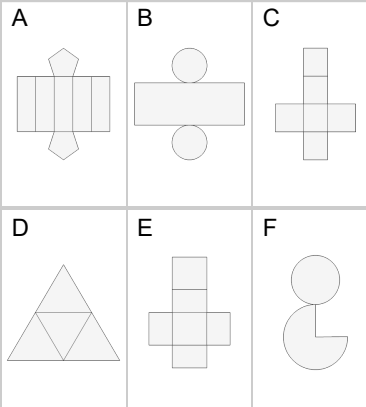
6 What net would make this 3D shape?

Rectangular Pyramid



7 What net would make this 3D shape?

Cylinder



8 What net would make this 3D shape?

Cone

