
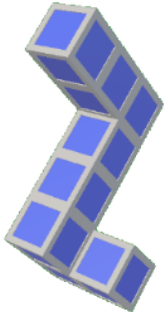




## 3D Shapes - Rotation - Find Match




1




Which answer is a rotation of this shape?


A



B



2




Which answer is a rotation of this shape?

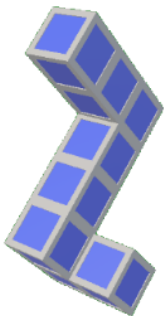
A



B




3



Which answer is a rotation of this shape?


A



B




4




Which answer is a rotation of this shape?

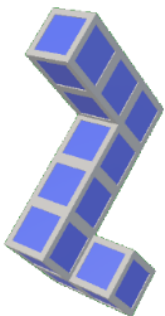
A



B




5



Which answer is a rotation of this shape?


A



B




6




Which answer is a rotation of this shape?


A



B




7



Which answer is a rotation of this shape?


A



B



8



Which answer is a rotation of this shape?

A



B

