
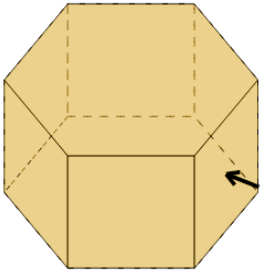
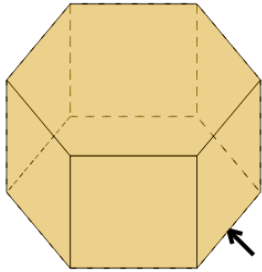
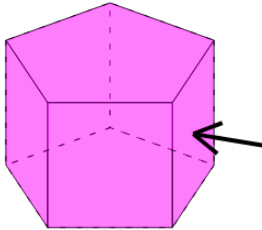
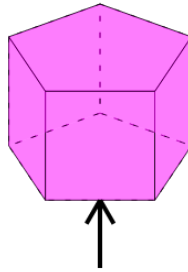
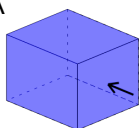
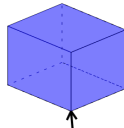
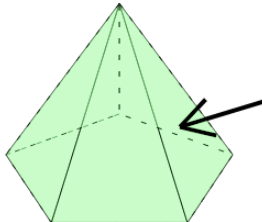
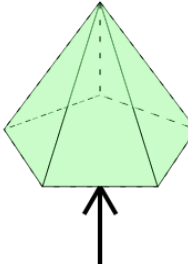
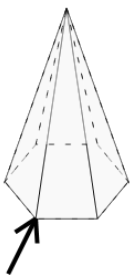
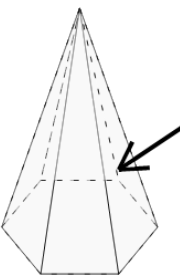
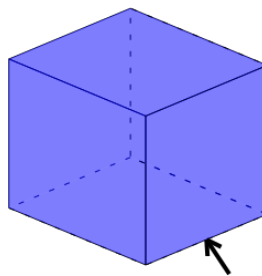
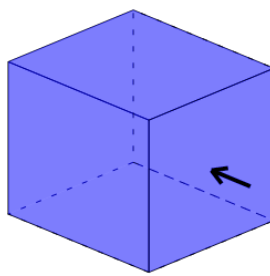
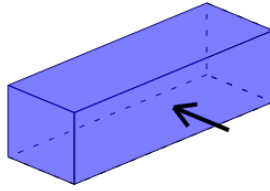
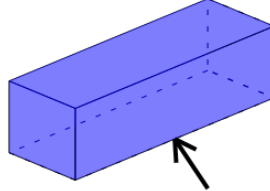
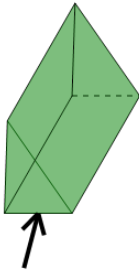




3D Shapes - Side, Vertex, Face Naming - Name to Image



1 Which arrow is pointing to a face of the Hexagonal Prism? A 	Hexagonal Prism: face B 	2 Which arrow is pointing to a side of the Pentagonal Prism? A 	Pentagonal Prism: side B 
3 Rectangular Prism: vertex Which arrow is pointing to a vertex of the Rectangular Prism? A 	Rectangular Prism: vertex B 	4 Which arrow is pointing to a side of the Pentagonal Pyramid? A 	Pentagonal Pyramid: side B 
5 Which arrow is pointing to a face of the Hexagonal Pyramid? A 	Hexagonal Pyramid: face B 	6 Which arrow is pointing to a side of the Rectangular Prism? A 	Rectangular Prism: side B 
7 Which arrow is pointing to a face of the Rectangular Prism? A 	Rectangular Prism: face B 	8 Which arrow is pointing to a vertex of the Triangular Prism? A 	Triangular Prism: vertex B 