

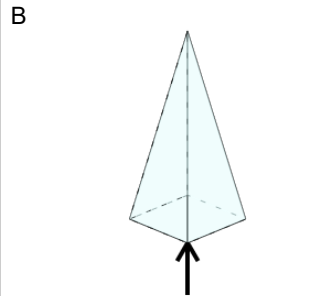
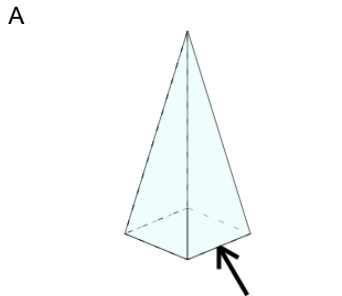


## 3D Shapes - Side, Vertex, Face Naming - Name to Image



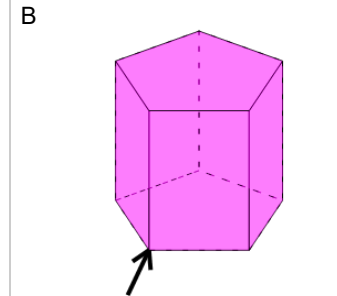
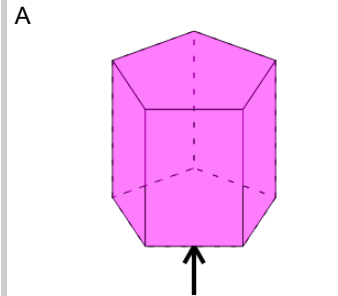
**1** Which arrow is pointing to a vertex of the Square Pyramid?

Square Pyramid: vertex



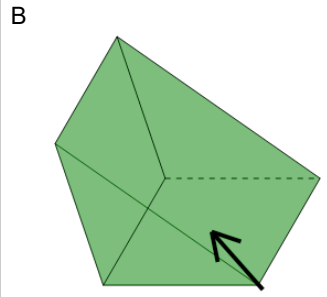
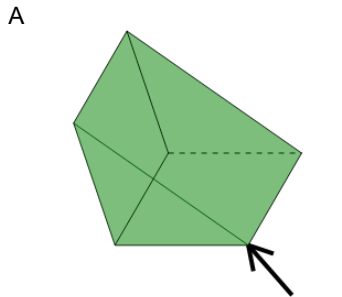
**2** Which arrow is pointing to a vertex of the Pentagonal Prism?

Pentagonal Prism: vertex



**3** Which arrow is pointing to a face of the Triangular Prism?

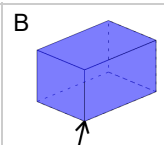
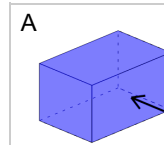
Triangular Prism: face



**4**

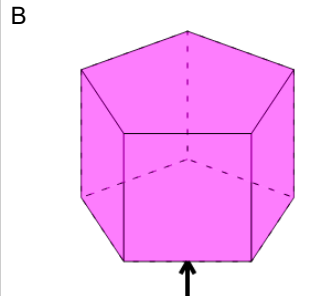
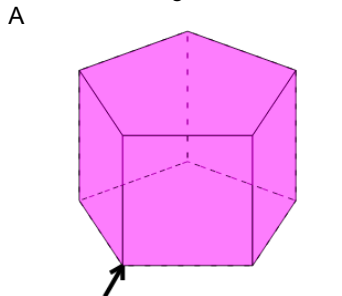
Rectangular Prism: vertex

Which arrow is pointing to a vertex of the Rectangular Prism?



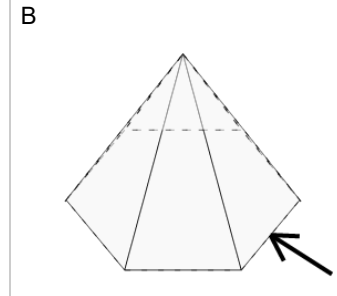
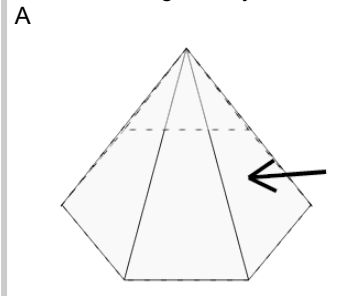
**5** Which arrow is pointing to a side of the Pentagonal Prism?

Pentagonal Prism: side



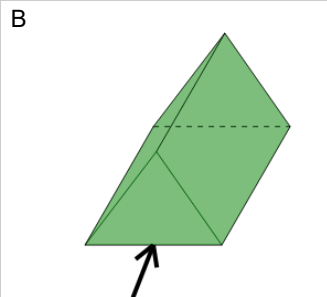
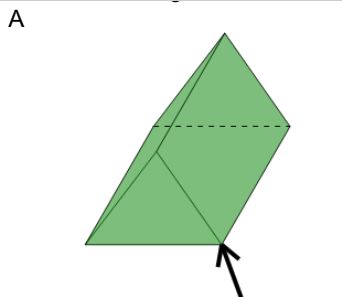
**6** Which arrow is pointing to a face of the Hexagonal Pyramid?

Hexagonal Pyramid: face



**7** Which arrow is pointing to a side of the Triangular Prism?

Triangular Prism: side



**8** Which arrow is pointing to a face of the Rectangular Prism?

Rectangular Prism: face

