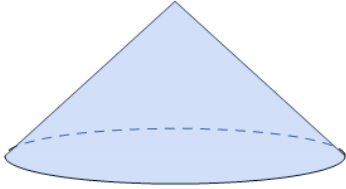




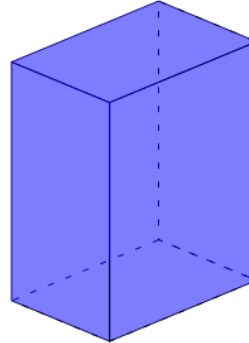
1



Is this shape a Cone (a round base and round sides coming to a point)?

A	B
No	Yes

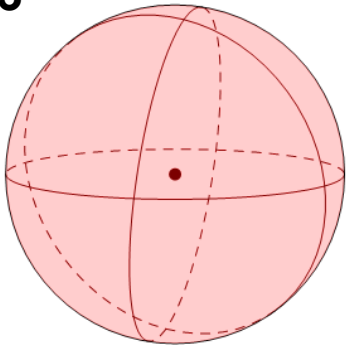
2



Is this shape a Rectangular Prism (right angle corners and 6 faces that are rectangles)?

A	B
Yes	No

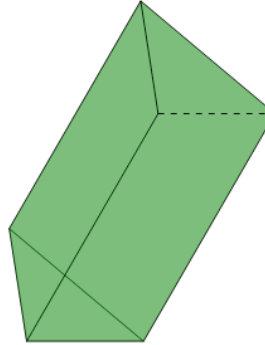
3



Is this shape a Sphere (a ball shape)?

A	B
No	Yes

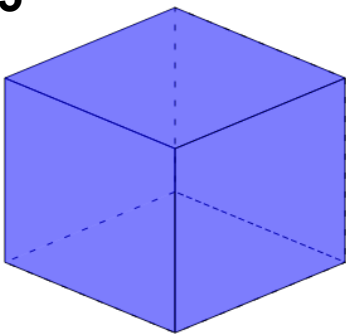
4



Is this shape a Triangular Prism (a triangular base and parallel sides coming to a triangular top)?

A	B
Yes	No

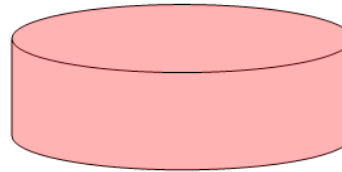
5



Is this shape a Cube (right angle corners and 6 faces that are squares)?

A	B
No	Yes

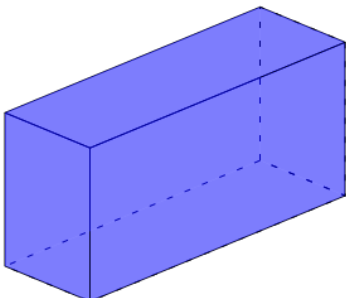
6



Is this shape a Triangular Prism (a triangular base and parallel sides coming to a triangular top)?

A	B
No	Yes

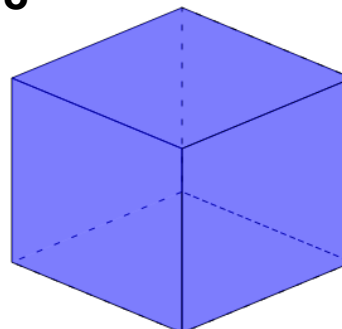
7



Is this shape a Rectangular Prism (right angle corners and 6 faces that are rectangles)?

A	B
No	Yes

8



Is this shape a Cube (right angle corners and 6 faces that are squares)?

A	B
Yes	No