


**1**

What shape does this object have?



- A Rectangular Prism
- B Sphere
- C Triangular Prism
- D Cone
- E Cylinder
- F Cube

2


What shape does this object have?



- A Cube
- B Sphere
- C Rectangular Prism
- D Triangular Prism
- E Cylinder
- F Cone

3

What shape does this object have?



- A Cone
- B Rectangular Prism
- C Triangular Prism
- D Cylinder
- E Sphere
- F Cube

4

What shape does this object have?



- A Cylinder
- B Triangular Prism
- C Sphere
- D Cone
- E Cube
- F Rectangular Prism

5

What shape does this object have?



- A Triangular Prism
- B Cube
- C Sphere
- D Cylinder
- E Cone
- F Rectangular Prism

6


What shape does this object have?



- A Cone
- B Rectangular Prism
- C Cube
- D Cylinder
- E Sphere
- F Triangular Prism

7

What shape does this object have?



- A Rectangular Prism
- B Sphere
- C Cone
- D Cylinder
- E Triangular Prism

8

What shape does this object have?



- A Cylinder
- B Cube
- C Rectangular Prism
- D Sphere
- E Cone
- F Triangular Prism