




mobius

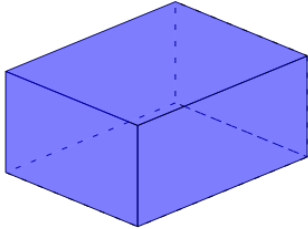
Simple 3D Shapes

Name _____



1

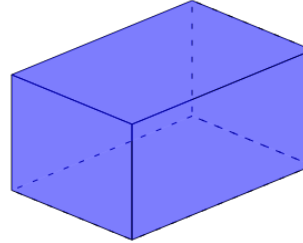
Name the type of shape



- A Rectangular Prism
- B Cone
- C Triangular Prism
- D Sphere
- E Cylinder

2

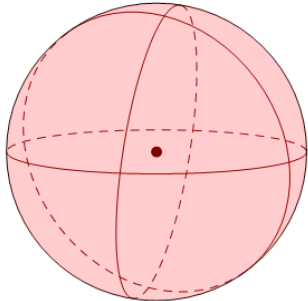
Name the type of shape



- A Triangular Prism
- B Sphere
- C Cone
- D Rectangular Prism
- E Cylinder

3

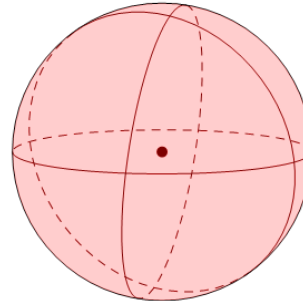
Name the type of shape



- A Cone
- B Sphere
- C Triangular Prism
- D Rectangular Prism
- E Cylinder
- F Cube

4

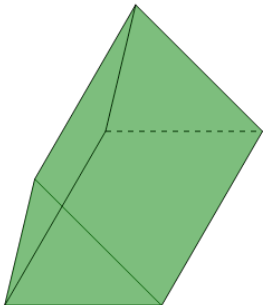
Name the type of shape



- A Cube
- B Cone
- C Triangular Prism
- D Sphere
- E Rectangular Prism
- F Cylinder

5

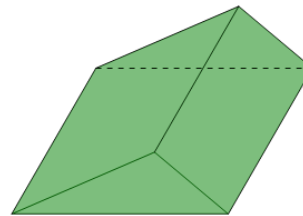
Name the type of shape



- A Cylinder
- B Sphere
- C Triangular Prism
- D Rectangular Prism
- E Cube
- F Cone

6

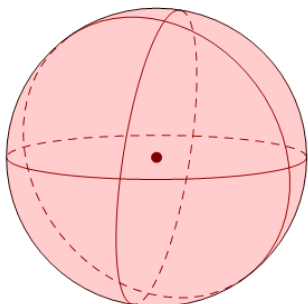
Name the type of shape



- A Cube
- B Cylinder
- C Cone
- D Triangular Prism
- E Sphere
- F Rectangular Prism

7

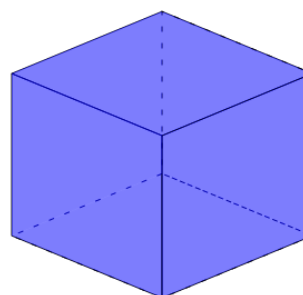
Name the type of shape



- A Cube
- B Triangular Prism
- C Rectangular Prism
- D Sphere
- E Cylinder
- F Cone

8

Name the type of shape



- A Cone
- B Cylinder
- C Triangular Prism
- D Cube
- E Sphere